

Number Line Addition - MCQ

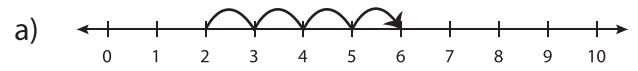
Sheet 5

Identify the correct number line for each addition sentence.

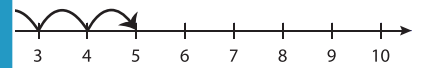
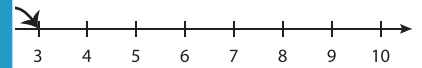
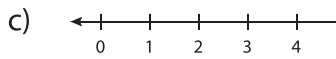
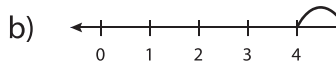
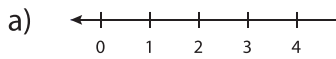
1) $4 + 1 = 5$



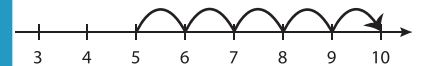
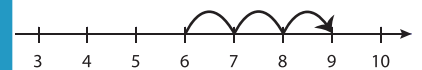
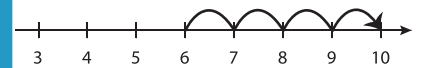
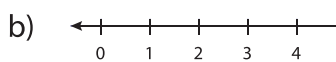
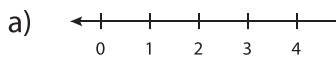
2) $2 + 4 = 6$



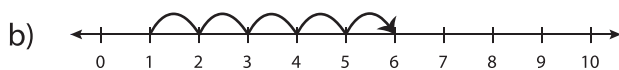
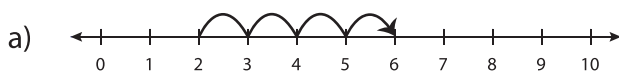
3) $4 + 5 = 9$



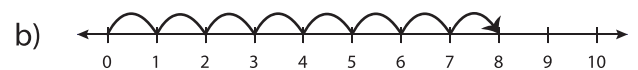
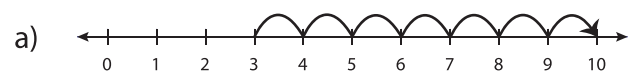
5) $7 + 1 = 8$



7) $1 + 6 = 7$



8) $0 + 8 = 8$



PREVIEW

Gain complete access to the largest collection of worksheets in all subjects!

Members, please log in to download this worksheet.

Not a member? Please sign up to gain complete access.

www.mathworksheets4kids.com