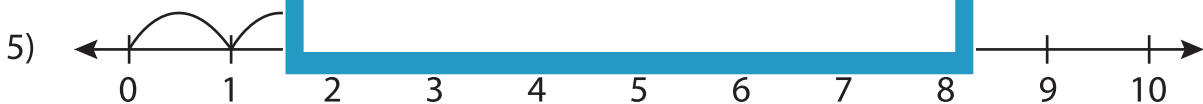
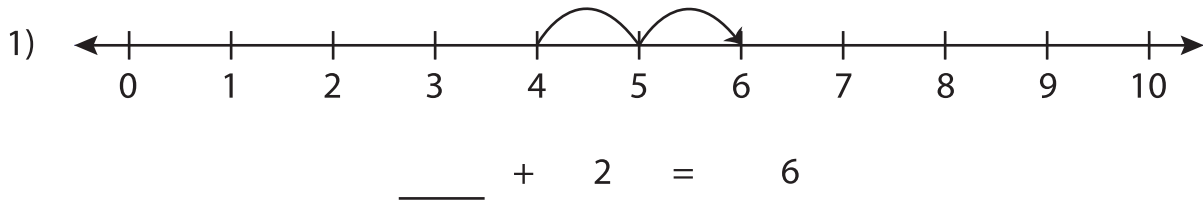


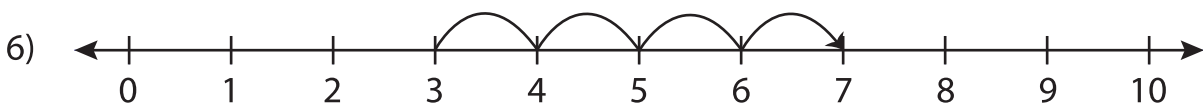
Addition Sentence - Missing Numbers

0-10: S3

Complete the addition sentence that describes each model.



0 + = 5



3 + 4 =

PREVIEW

Gain complete access to the largest collection of worksheets in all subjects!

Members, please log in to download this worksheet.

Not a member? Please sign up to gain complete access.

www.mathworksheets4kids.com