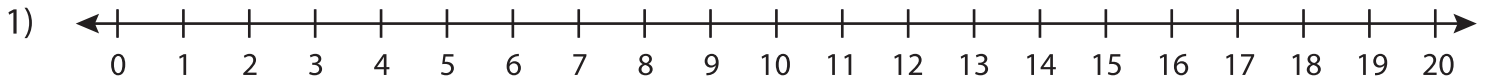


Addition

0-20: S3

Solve using number line.

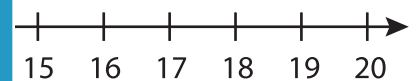
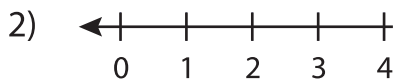


a) $10 + 2 = \underline{\quad}$ b) $7 + 6 = \underline{\quad}$ c) $3 + 9 = \underline{\quad}$

d) $6 + 11 = \underline{\quad}$ e) $5 + 8 = \underline{\quad}$

g) $2 + 16 = \underline{\quad}$ f) $3 + 6 = \underline{\quad}$

j) $11 + 8 = \underline{\quad}$ h) $11 + 14 = \underline{\quad}$



a)
$$\begin{array}{r} 9 \\ + 4 \\ \hline \end{array}$$

d)
$$\begin{array}{r} 7 \\ + 8 \\ \hline \end{array}$$

e)
$$\begin{array}{r} 14 \\ + 5 \\ \hline \end{array}$$

f)
$$\begin{array}{r} 11 \\ + 7 \\ \hline \end{array}$$

g)
$$\begin{array}{r} 16 \\ + 3 \\ \hline \end{array}$$

h)
$$\begin{array}{r} 18 \\ + 2 \\ \hline \end{array}$$

i)
$$\begin{array}{r} 12 \\ + 8 \\ \hline \end{array}$$

j)
$$\begin{array}{r} 8 \\ + 4 \\ \hline \end{array}$$

k)
$$\begin{array}{r} 10 \\ + 8 \\ \hline \end{array}$$

l)
$$\begin{array}{r} 17 \\ + 2 \\ \hline \end{array}$$

PREVIEW

Gain complete access to the largest
collection of worksheets in all subjects!

Members, please
log in to
download this
worksheet.

Not a member?
Please sign up to
gain complete
access.

www.mathworksheets4kids.com