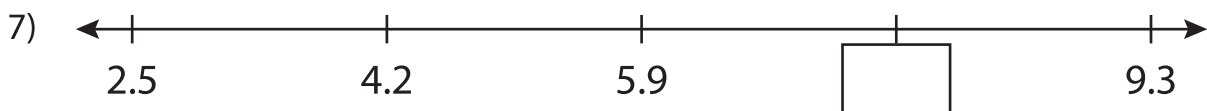
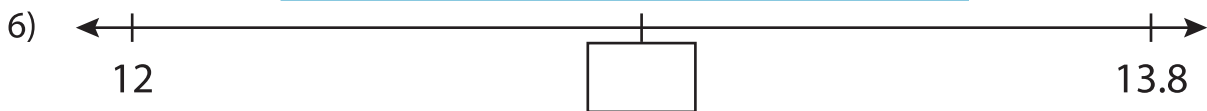
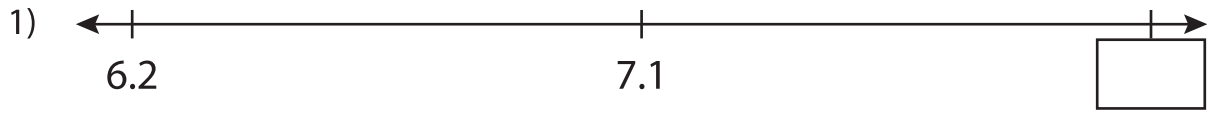


Name : _____

Missing Numbers

Tenth: T1S5

Write the missing number in each number line.



PREVIEW

Gain complete access to the largest collection of worksheets in all subjects!

Members, please log in to download this worksheet.

Not a member? Please sign up to gain complete access.

www.mathworksheets4kids.com