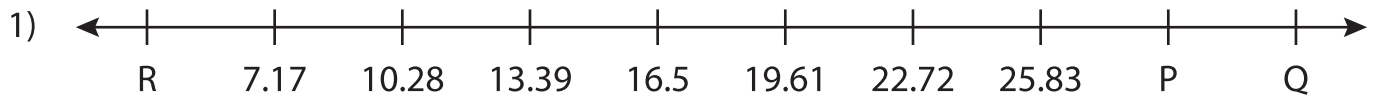


Name : \_\_\_\_\_

# Missing Numbers

Hundredth: T3S1

What numbers do the letters in each number line represent?



P = \_\_\_\_\_ ; Q = \_\_\_\_\_ ; R = \_\_\_\_\_



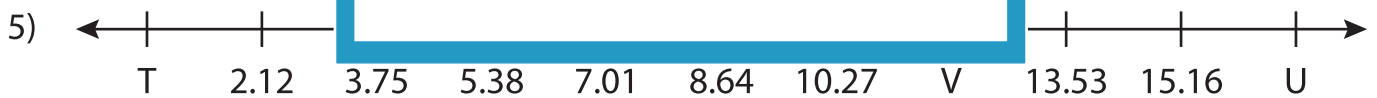
L = \_\_\_\_\_



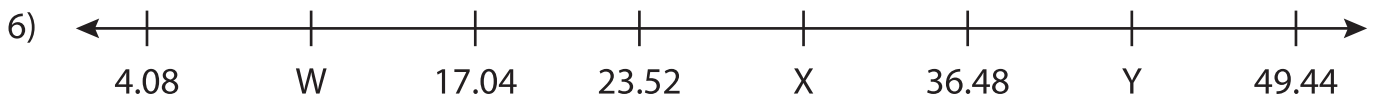
J = \_\_\_\_\_



C = \_\_\_\_\_



T = \_\_\_\_\_ ; U = \_\_\_\_\_ ; V = \_\_\_\_\_



W = \_\_\_\_\_ ; X = \_\_\_\_\_ ; Y = \_\_\_\_\_

**PREVIEW**

Gain complete access to the largest collection of worksheets in all subjects!

Members, please log in to download this worksheet.

Not a member? Please sign up to gain complete access.

[www.mathworksheets4kids.com](http://www.mathworksheets4kids.com)