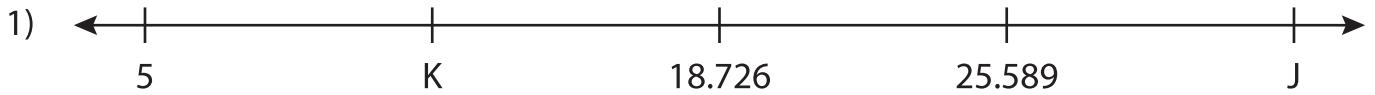


Name : _____

Missing Numbers

Thousandth: T3S3

What numbers do the letters in each number line represent?



J = _____ ; K = _____ ; L = _____



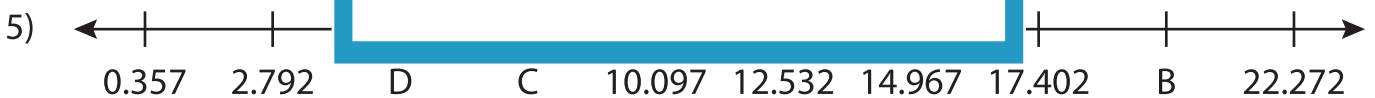
X = _____




F = _____



V = _____



B = _____ ; C = _____ ; D = _____



R = _____ ; S = _____ ; T = _____

PREVIEW

Gain complete access to the largest collection of worksheets in all subjects!

Members, please log in to download this worksheet.

Not a member? Please sign up to gain complete access.

www.mathworksheets4kids.com