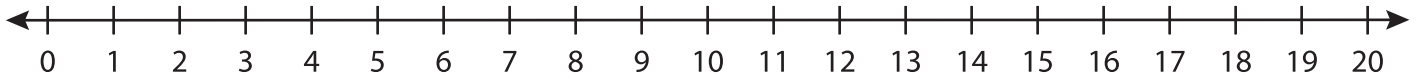


# Number Line Division

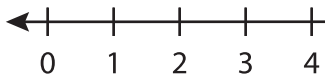
T1S5

Indicate hops on each number line and complete the division sentences.

1)  $12 \div 2 =$  \_\_\_\_\_



2)  $20 \div 10 =$  \_\_\_\_\_



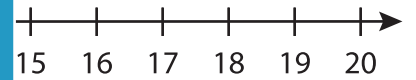
# PREVIEW

Gain complete access to the largest  
collection of worksheets in all subjects!

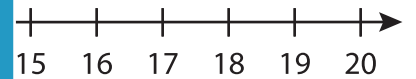
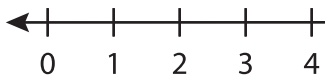
Members, please  
log in to  
download this  
worksheet.

Not a member?  
Please sign up to  
gain complete  
access.

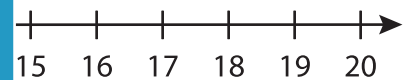
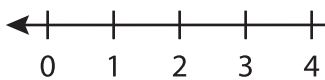
[www.mathworksheets4kids.com](http://www.mathworksheets4kids.com)



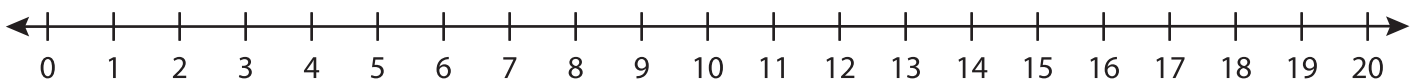
3)  $18 \div 3 =$  \_\_\_\_\_



4)  $8 \div 1 =$  \_\_\_\_\_



5)  $10 \div 5 =$  \_\_\_\_\_



6)  $6 \div 6 =$  \_\_\_\_\_

