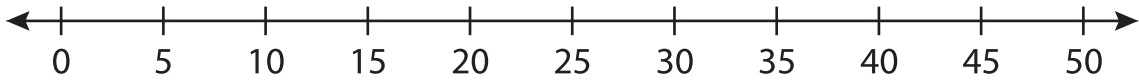


## Number Line Division

T2S1

Indicate hops on each number line and complete the division sentences.

1)  $30 \div 5 = \underline{\hspace{2cm}}$



2)  $18 \div 2 = \underline{\hspace{2cm}}$



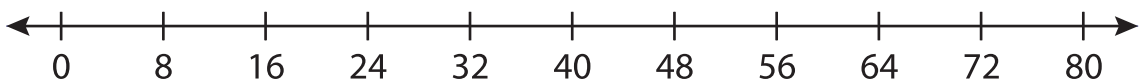
3)  $21 \div 3 = \underline{\hspace{2cm}}$



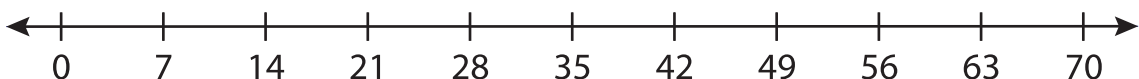
4)  $72 \div 9 = \underline{\hspace{2cm}}$



5)  $24 \div 8 = \underline{\hspace{2cm}}$



6)  $35 \div 7 = \underline{\hspace{2cm}}$



# PREVIEW

Gain complete access to the largest collection of worksheets in all subjects!

Members, please  
log in to  
download this  
worksheet.

Not a member?  
Please sign up to  
gain complete  
access.

[www.mathworksheets4kids.com](http://www.mathworksheets4kids.com)