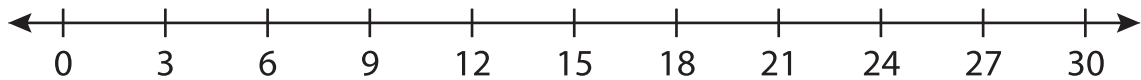


Number Line Division

T2S4

Indicate hops on each number line and complete the division sentences.

1) $12 \div 3 = \underline{\hspace{2cm}}$



2) $64 \div 8 = \underline{\hspace{2cm}}$



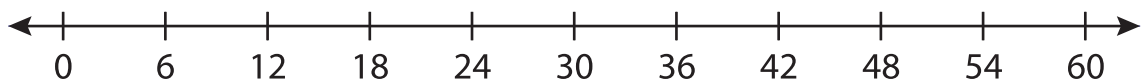
3) $27 \div 9 = \underline{\hspace{2cm}}$



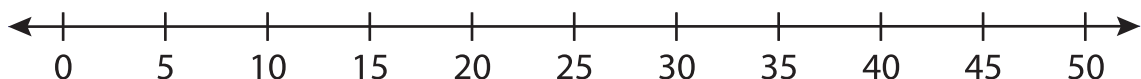
4) $42 \div 7 = \underline{\hspace{2cm}}$



5) $30 \div 6 = \underline{\hspace{2cm}}$



6) $45 \div 5 = \underline{\hspace{2cm}}$



PREVIEW

Gain complete access to the largest collection of worksheets in all subjects!

Members, please log in to download this worksheet.

Not a member? Please sign up to gain complete access.

www.mathworksheets4kids.com