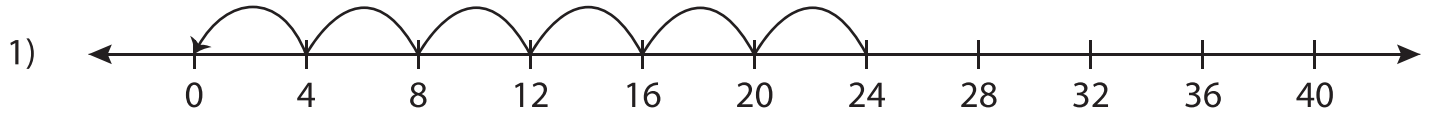


Number Line Division - MCQ

Sheet 3

Identify the correct division sentence for each number line.



- a) $24 \div 6 = 4$ b) $14 \div 1 = 14$ c) $24 \div 4 = 6$ d) $40 \div 4 = 10$



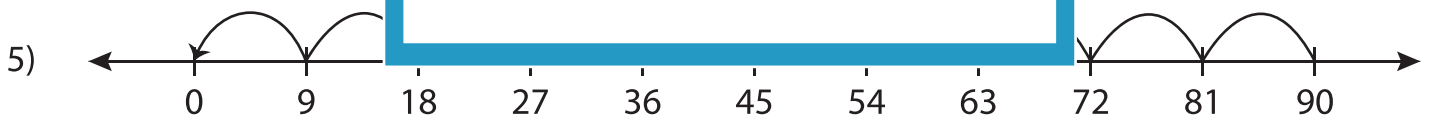
- a) $48 \div 6 = 8$ d) $48 \div 4 = 12$



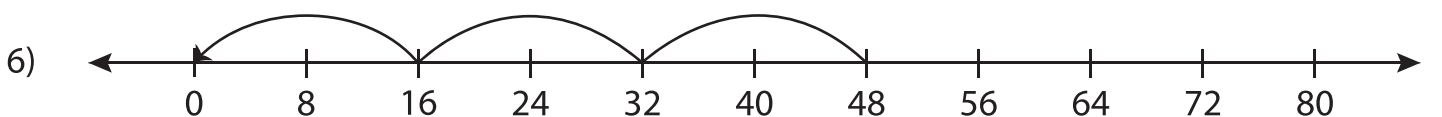
- a) $70 \div 5 = 14$ d) $35 \div 7 = 5$



- a) $8 \div 4 = 2$ d) $10 \div 2 = 5$



- a) $72 \div 9 = 8$ b) $90 \div 9 = 10$ c) $72 \div 8 = 9$ d) $90 \div 10 = 9$



- a) $48 \div 16 = 3$ b) $48 \div 4 = 12$ c) $48 \div 12 = 4$ d) $48 \div 3 = 16$

PREVIEW

Gain complete access to the largest
collection of worksheets in all subjects!

Members, please
log in to
download this
worksheet.

Not a member?
Please sign up to
gain complete
access.

www.mathworksheets4kids.com