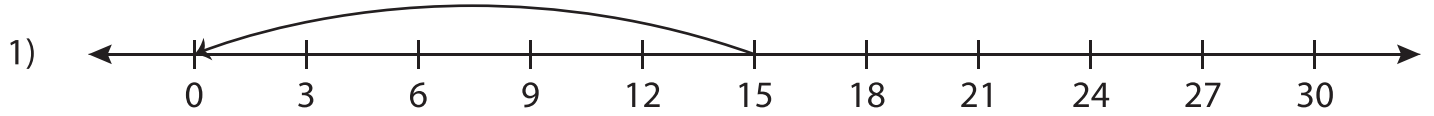


## Number Line Division - MCQ

Sheet 5

Identify the correct division sentence for each number line.



- a)  $15 \div 15 = 1$       b)  $25 \div 5 = 5$       c)  $30 \div 5 = 6$       d)  $15 \div 5 = 3$



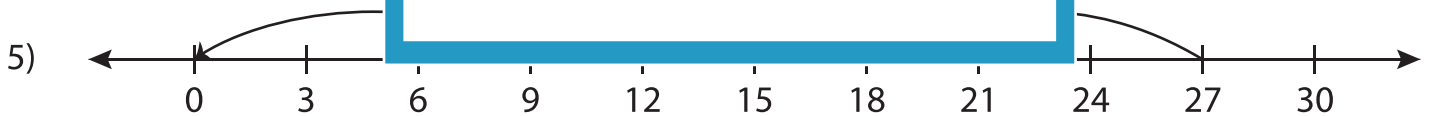
- a)  $45 \div 9 = 5$       d)  $50 \div 10 = 5$



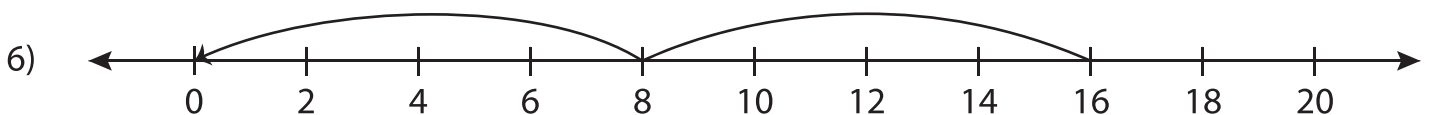
- a)  $18 \div 3 = 6$       d)  $36 \div 6 = 6$



- a)  $40 \div 10 = 4$       d)  $40 \div 5 = 8$



- a)  $27 \div 3 = 9$       b)  $30 \div 3 = 10$       c)  $27 \div 9 = 3$       d)  $18 \div 3 = 6$



- a)  $16 \div 4 = 4$       b)  $16 \div 8 = 2$       c)  $8 \div 4 = 2$       d)  $20 \div 5 = 4$

# PREVIEW

Gain complete access to the largest  
collection of worksheets in all subjects!

Members, please  
log in to  
download this  
worksheet.

Not a member?  
Please sign up to  
gain complete  
access.

[www.mathworksheets4kids.com](http://www.mathworksheets4kids.com)