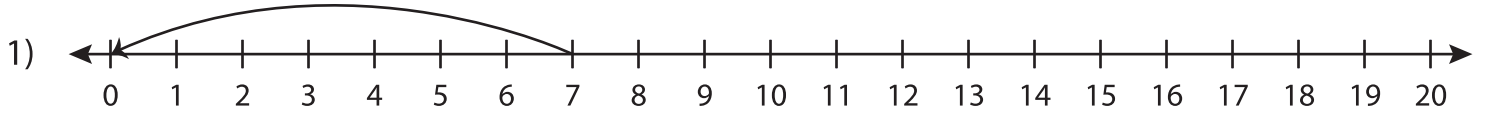


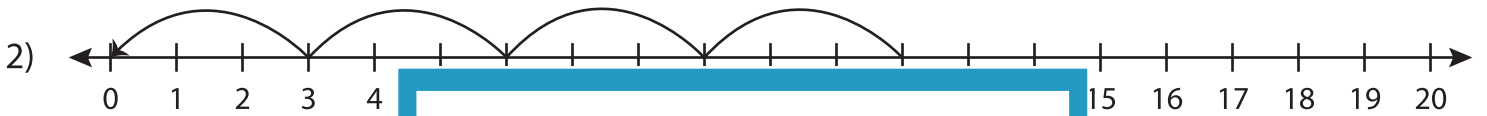
Division Sentence - Missing Numbers

T1S2

Complete the division sentence that describes each model.



$$7 \div \underline{\quad} = 1$$



12

PREVIEW

Gain complete access to the largest
collection of worksheets in all subjects!

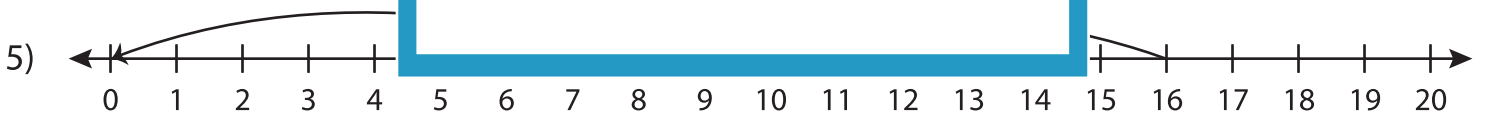
Members, please
log in to
download this
worksheet.

Not a member?
Please sign up to
gain complete
access.

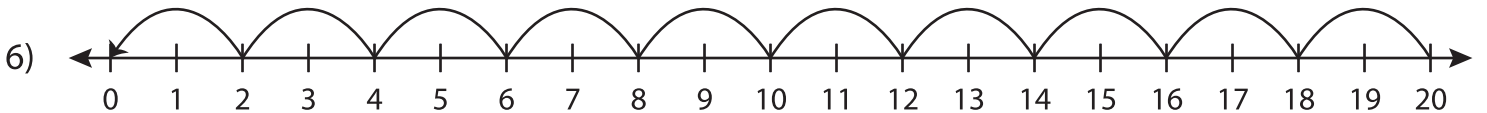
www.mathworksheets4kids.com



18



$$16 \div 8 = \underline{\quad}$$



$$\underline{\quad} \div 2 = 10$$