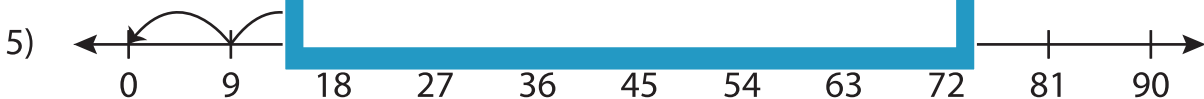
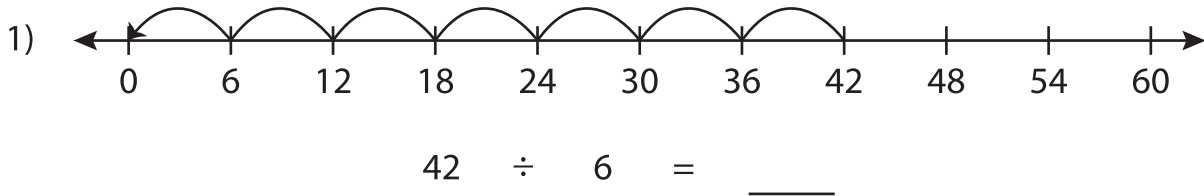


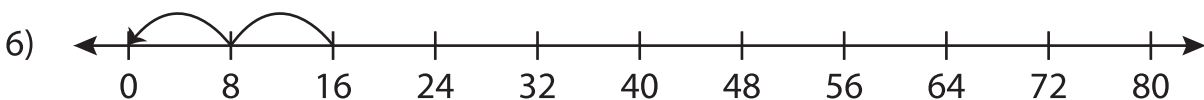
## Division Sentence - Missing Numbers

T2S3

Complete the division sentence that describes each model.



$36 \div 9 = \underline{\quad}$



$16 \div \underline{\quad} = 2$

# PREVIEW

Gain complete access to the largest collection of worksheets in all subjects!

Members, please log in to download this worksheet.

Not a member? Please sign up to gain complete access.

[www.mathworksheets4kids.com](http://www.mathworksheets4kids.com)