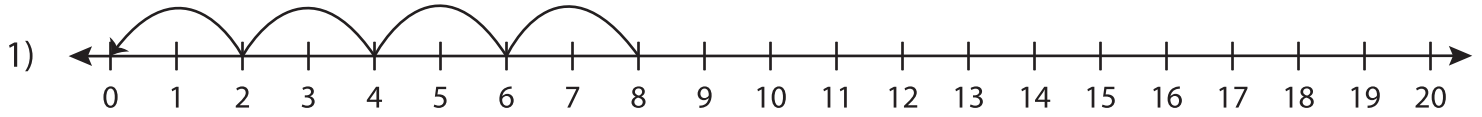


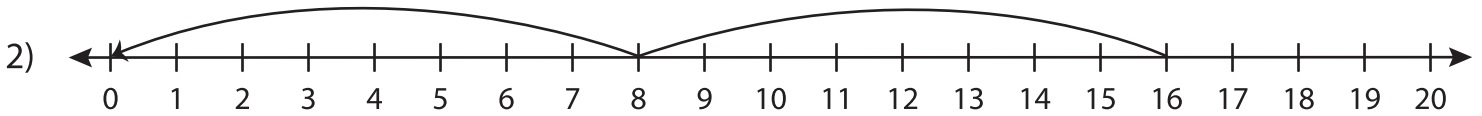
Division Sentence

T1S1

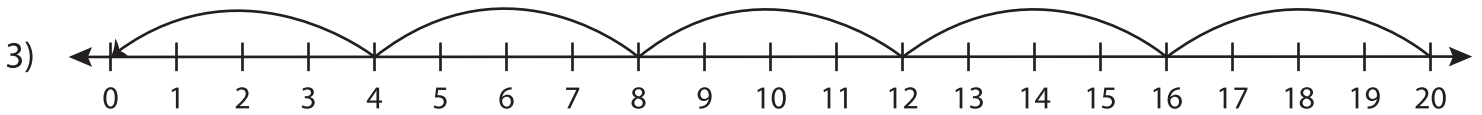
Write the division sentence that describes each model.



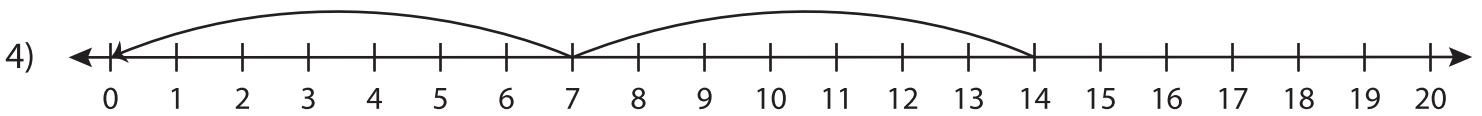
$$\underline{\quad\quad} \div \underline{\quad\quad} = \underline{\quad\quad}$$



$$\underline{\quad\quad} \div \underline{\quad\quad} = \underline{\quad\quad}$$



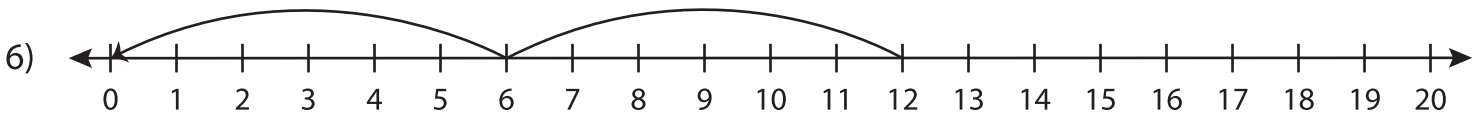
$$\underline{\quad\quad} \div \underline{\quad\quad} = \underline{\quad\quad}$$



$$\underline{\quad\quad} \div \underline{\quad\quad} = \underline{\quad\quad}$$



$$\underline{\quad\quad} \div \underline{\quad\quad} = \underline{\quad\quad}$$



$$\underline{\quad\quad} \div \underline{\quad\quad} = \underline{\quad\quad}$$