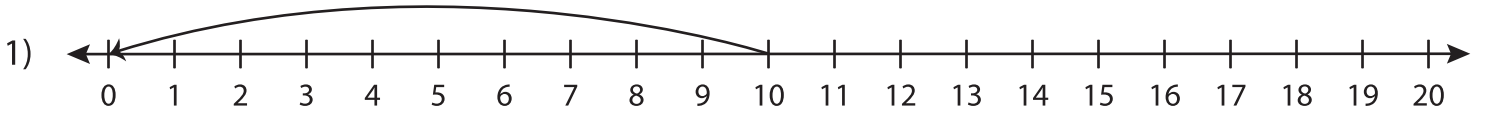


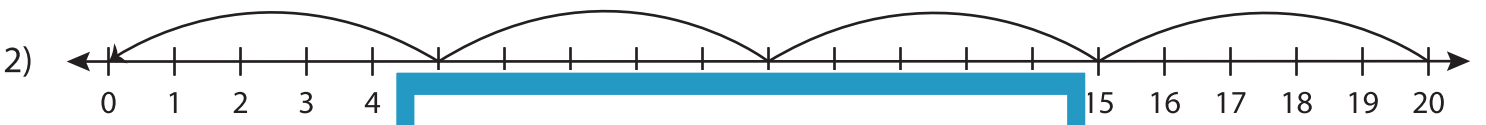
# Division Sentence

T1S3

Write the division sentence that describes each model.



\_\_\_\_\_ ÷ \_\_\_\_\_ = \_\_\_\_\_



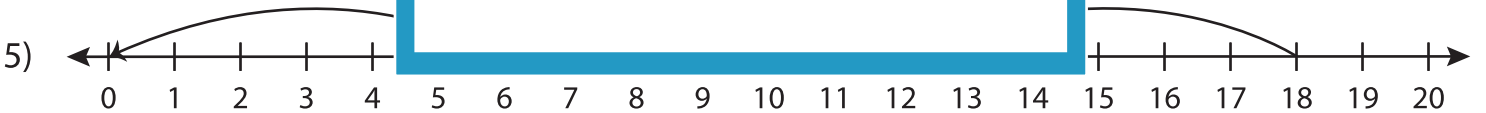
\_\_\_\_\_ ÷ \_\_\_\_\_ = \_\_\_\_\_



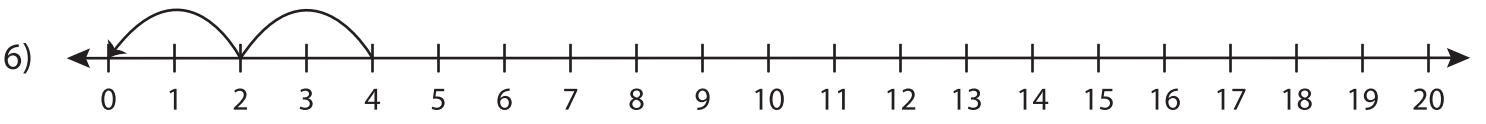
\_\_\_\_\_ ÷ \_\_\_\_\_ = \_\_\_\_\_



\_\_\_\_\_ ÷ \_\_\_\_\_ = \_\_\_\_\_



\_\_\_\_\_ ÷ \_\_\_\_\_ = \_\_\_\_\_



\_\_\_\_\_ ÷ \_\_\_\_\_ = \_\_\_\_\_

## PREVIEW

Gain complete access to the largest collection of worksheets in all subjects!

Members, please log in to download this worksheet.

Not a member? Please sign up to gain complete access.

www.mathworksheets4kids.com