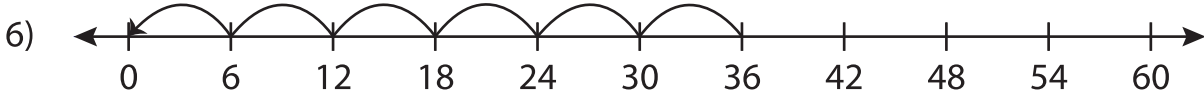
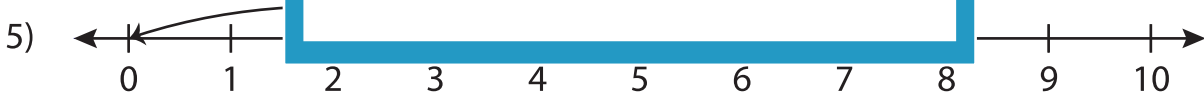
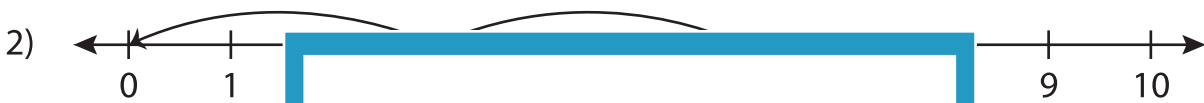
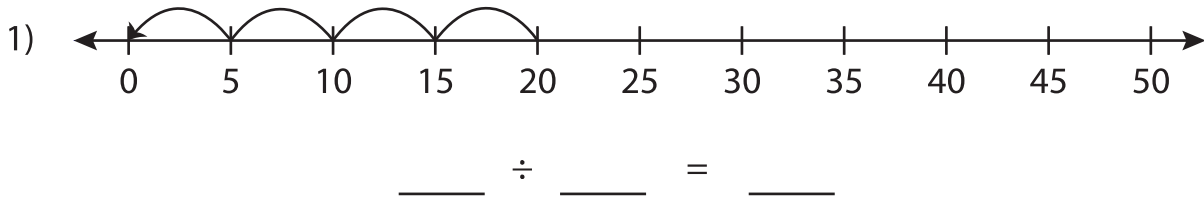


Division Sentence

T2S2

Write the division sentence that describes each model.



_____ ÷ _____ = _____

_____ ÷ _____ = _____

PREVIEW

Gain complete access to the largest collection of worksheets in all subjects!

Members, please log in to download this worksheet.

Not a member? Please sign up to gain complete access.

www.mathworksheets4kids.com