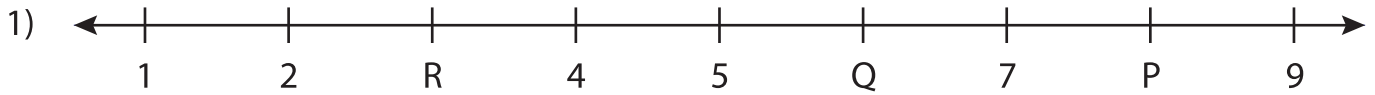


Name : _____

Missing Numbers

T3L1S5

What numbers do the letters in each number line represent?



P = _____ ; Q = _____ ; R = _____



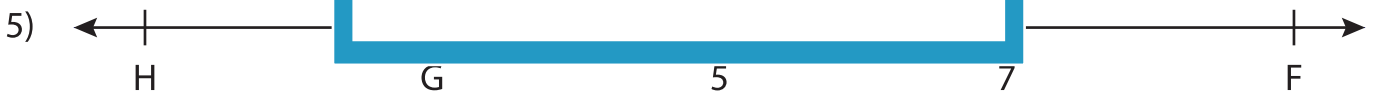
T = _____



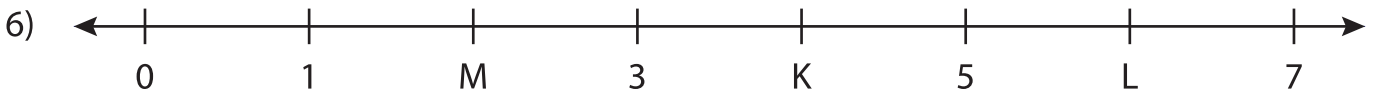
A = _____



Q = _____



F = _____ ; G = _____ ; H = _____



K = _____ ; L = _____ ; M = _____

PREVIEW

Gain complete access to the largest collection of worksheets in all subjects!

Members, please log in to download this worksheet.

Not a member? Please sign up to gain complete access.

www.mathworksheets4kids.com