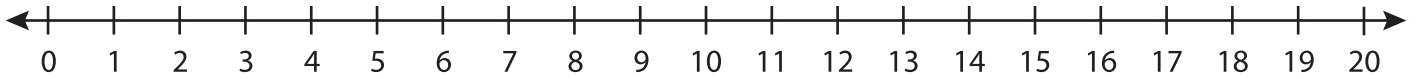


Number Line Multiplication

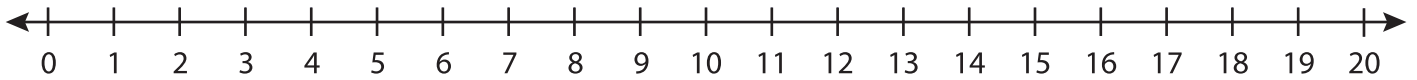
T1S1

Indicate hops on each number line and complete the multiplication sentences.

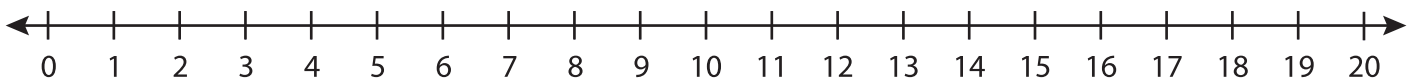
1) $4 \times 3 =$ _____



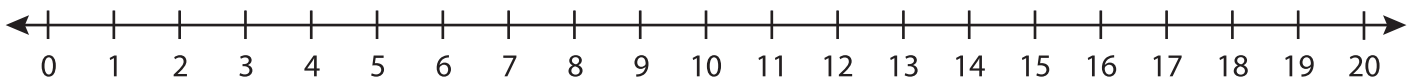
2) $5 \times 2 =$ _____



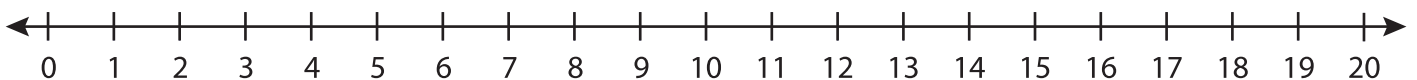
3) $2 \times 4 =$ _____



4) $3 \times 5 =$ _____



5) $9 \times 1 =$ _____



6) $7 \times 2 =$ _____

