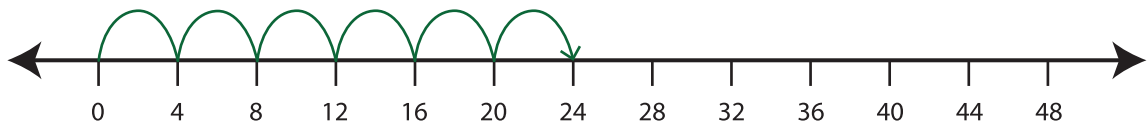


Number Line Multiplication

T2S5

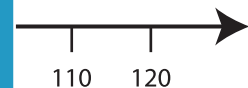
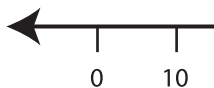
Example:

$$6 \times 4 = \underline{24}$$

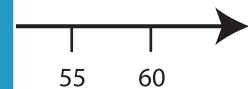
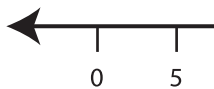


Indicate hops on each number line and complete the multiplication sentences.

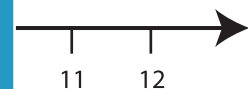
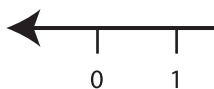
1) $3 \times 10 = \underline{\quad}$



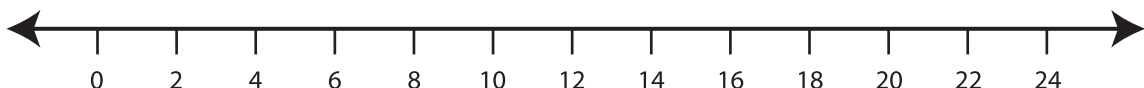
2) $2 \times 5 = \underline{\quad}$



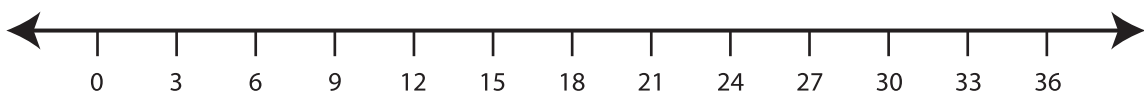
3) $7 \times 1 = \underline{\quad}$



4) $8 \times 2 = \underline{\quad}$



5) $3 \times 3 = \underline{\quad}$



PREVIEW

Gain complete access to the largest
collection of worksheets in all subjects!

Members, please
log in to
download this
worksheet.

Not a member?
Please sign up to
gain complete
access.

www.mathworksheets4kids.com