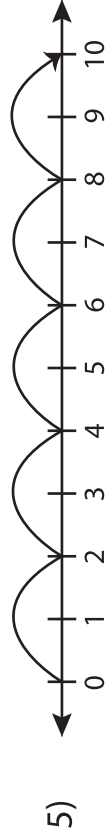
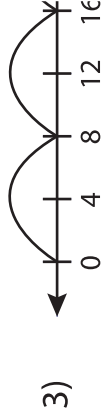
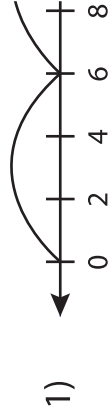


Number Line Vs Multiplication Sentence

Sheet 1

Match each number line to its equivalent multiplication sentence.



$$1 \times 15 = 15$$

$$5 \times 2 = 10$$

$$5 \times 3 = 15$$

$$3 \times 6 = 18$$

$$4 \times 8 = 32$$

PREVIEW

Gain complete access to the largest collection of worksheets in all subjects!

Members, please log in to download this worksheet.

Not a member? Please sign up to gain complete access.

www.mathworksheets4kids.com