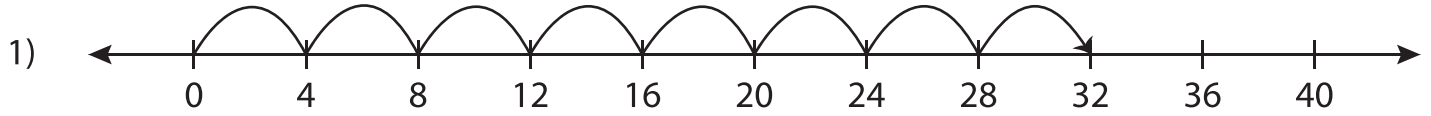


Number Line Multiplication - MCQ

Sheet 2

Identify the correct multiplication sentence for each number line.



a) $8 \times 6 = 48$

b) $7 \times 4 = 28$

c) $2 \times 16 = 32$

d) $8 \times 4 = 32$



a) $2 \times 2 = 4$

d) $2 \times 4 = 8$



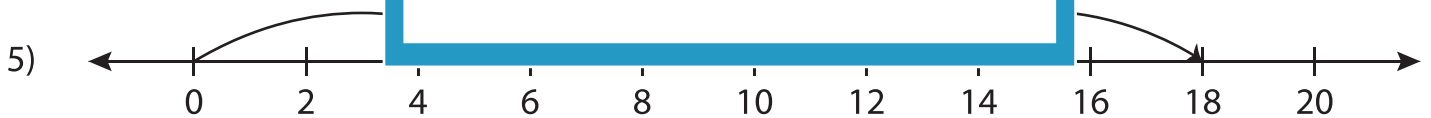
a) $9 \times 9 = 81$

d) $21 \times 3 = 63$



a) $9 \times 1 = 9$

d) $5 \times 3 = 15$

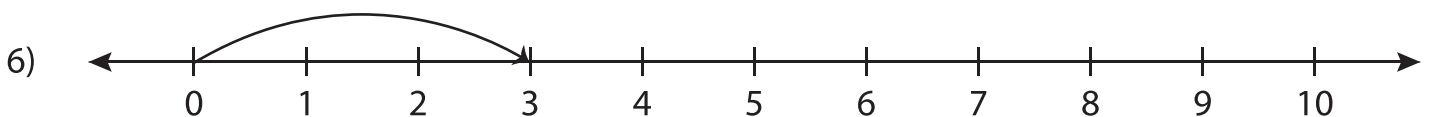


a) $3 \times 6 = 18$

b) $9 \times 2 = 18$

c) $3 \times 9 = 27$

d) $2 \times 6 = 12$



a) $3 \times 3 = 9$

b) $8 \times 1 = 8$

c) $1 \times 6 = 6$

d) $1 \times 3 = 3$

PREVIEW

Gain complete access to the largest collection of worksheets in all subjects!

Members, please log in to download this worksheet.

Not a member? Please sign up to gain complete access.

www.mathworksheets4kids.com