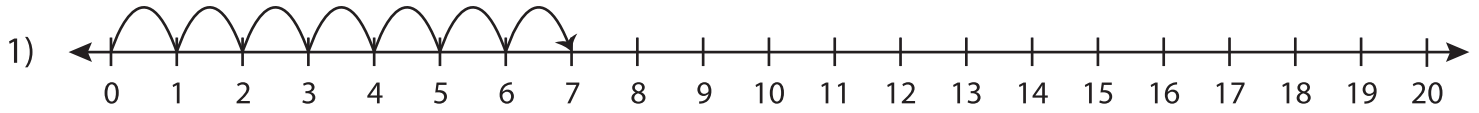


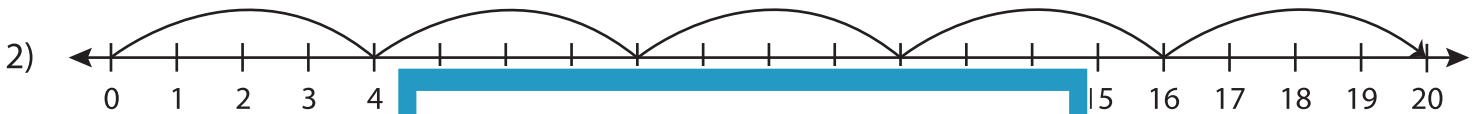
Multiplication Sentence - Missing Numbers

T1S2

Complete the multiplication sentence that describes each model.



$$\underline{\quad} \times 1 = 7$$



5

PREVIEW

Gain complete access to the largest
collection of worksheets in all subjects!

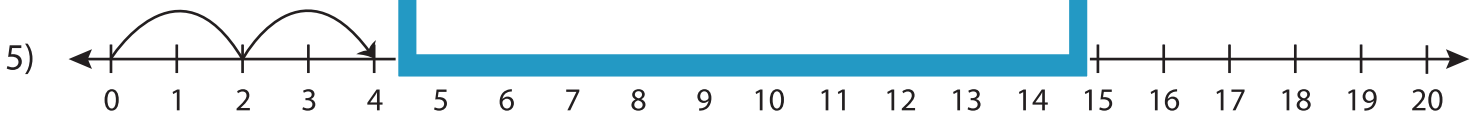
Members, please
log in to
download this
worksheet.

Not a member?
Please sign up to
gain complete
access.

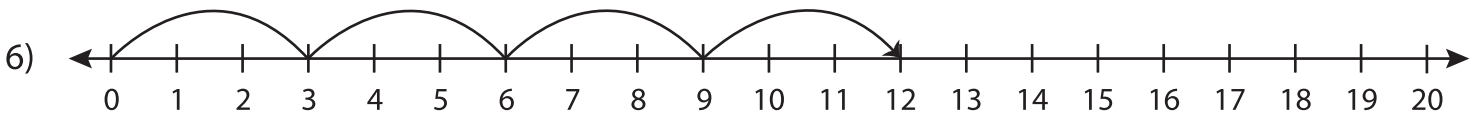
www.mathworksheets4kids.com



3



$$2 \times \underline{\quad} = 4$$



$$\underline{\quad} \times 3 = 12$$