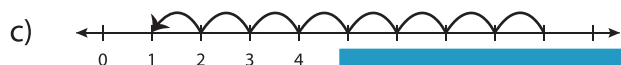
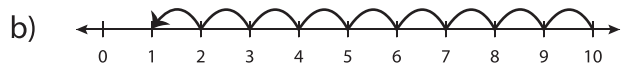
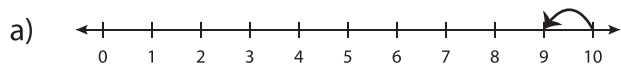


Number Line Subtraction - MCQ

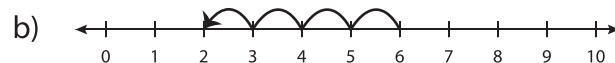
Sheet 2

Identify the correct number line for each subtraction sentence.

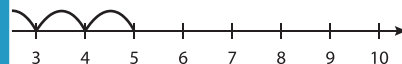
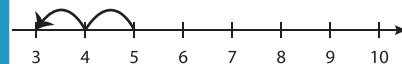
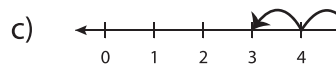
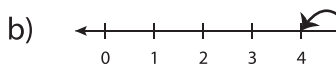
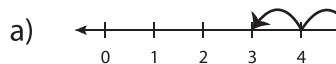
1) $10 - 1 = 9$



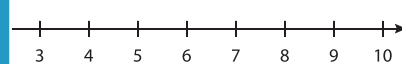
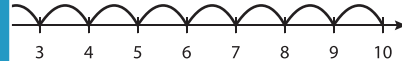
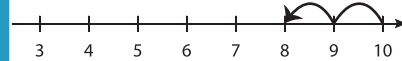
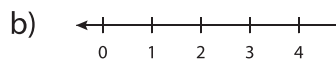
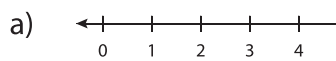
2) $6 - 2 = 4$



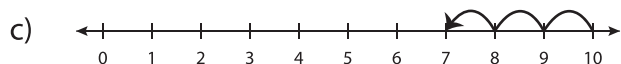
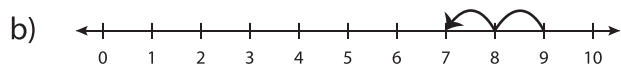
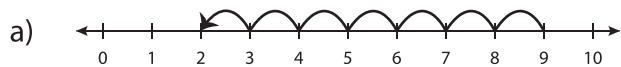
3) $7 - 4 = 3$



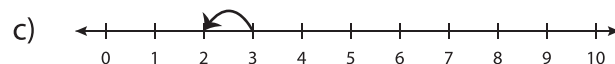
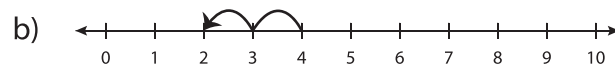
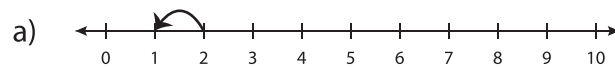
5) $8 - 7 = 1$



7) $9 - 2 = 7$



8) $2 - 1 = 1$



PREVIEW

Gain complete access to the largest
collection of worksheets in all subjects!

Members, please
log in to
download this
worksheet.

Not a member?
Please sign up to
gain complete
access.

www.mathworksheets4kids.com