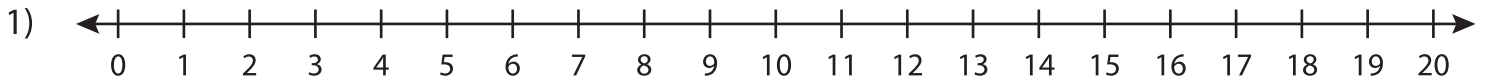


Subtraction

0-20: S1

Solve using number line.

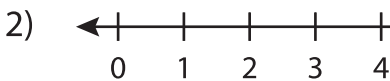


a) $16 - 2 = \underline{\quad}$ b) $7 - 4 = \underline{\quad}$ c) $12 - 11 = \underline{\quad}$

d) $8 - 6 = \underline{\quad}$ e) $15 - 2 = \underline{\quad}$

g) $20 - 8 = \underline{\quad}$ f) $17 - 7 = \underline{\quad}$

j) $14 - 3 = \underline{\quad}$ h) $11 - 6 = \underline{\quad}$



a)
$$\begin{array}{r} 20 \\ - 5 \\ \hline \end{array}$$

e)
$$\begin{array}{r} 14 \\ - 9 \\ \hline \end{array}$$

i)
$$\begin{array}{r} 7 \\ - 1 \\ \hline \end{array}$$

PREVIEW

Gain complete access to the largest
collection of worksheets in all subjects!

Members, please
log in to
download this
worksheet.

Not a member?
Please sign up to
gain complete
access.

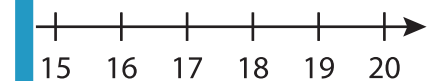
www.mathworksheets4kids.com

f)
$$\begin{array}{r} 18 \\ - 2 \\ \hline \end{array}$$

j)
$$\begin{array}{r} 10 \\ - 8 \\ \hline \end{array}$$

g)
$$\begin{array}{r} 5 \\ - 4 \\ \hline \end{array}$$

k)
$$\begin{array}{r} 16 \\ - 3 \\ \hline \end{array}$$



b)
$$\begin{array}{r} 11 \\ - 11 \\ \hline \end{array}$$

h)
$$\begin{array}{r} 17 \\ - 3 \\ \hline \end{array}$$

l)
$$\begin{array}{r} 12 \\ - 6 \\ \hline \end{array}$$