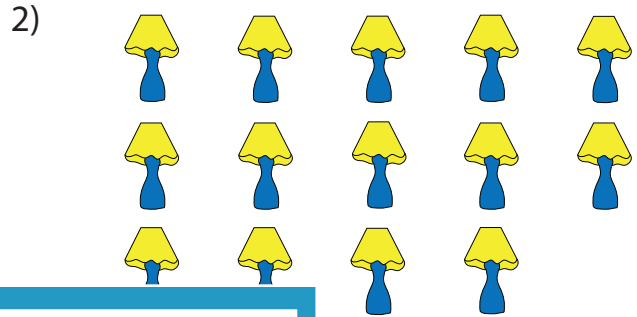


Count and Identify


Count the pictures. Classify the total as odd or even.



_____ glasses
odd / even



_____ lamps
n



_____ apples
odd / even


Gain complete access to the largest collection of worksheets in all subjects!

Members, please log in to download this worksheet.

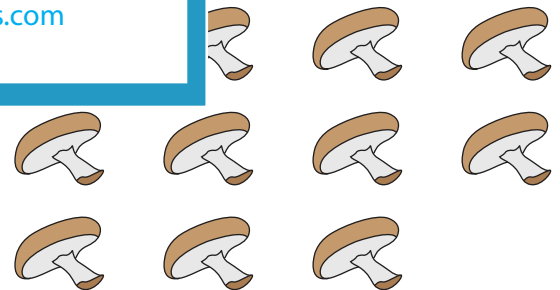
Not a member? Please sign up to gain complete access.



_____ chillies
n



_____ chocolates
odd / even



_____ mushrooms
odd / even

www.mathworksheets4kids.com