






A) Write the ordered pair for

each bird at each ordered pair.

- | | | | |
|----|---|-------|------------------|
| 1) |  | _____ | _____ |
| 2) |  | _____ | 1) (2, 5) _____ |
| 3) |  | _____ | 8) (9, 1) _____ |
| 4) |  | _____ | 9) (3, 9) _____ |
| 5) |  | _____ | 10) (5, 3) _____ |