

Name : _____

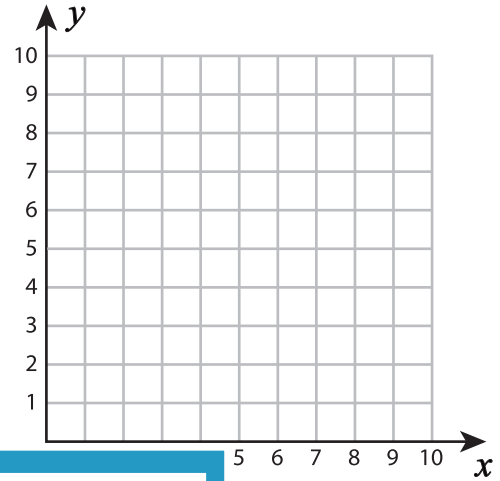
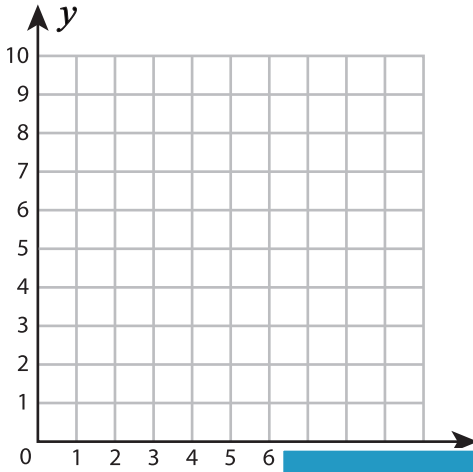
Plotting Points - Shapes

Positive: S2

Plot and join the points in the given order. Complete the figure by joining the end points. Identify the shape.

1) $(3, 3), (3, 6), (8, 6), (8, 3)$



2) $(2, 6), (6, 8), (10, 6), (8, 3), (4, 3)$



Shape: _____

3) $(2, 4), (6, 8), (9, 3)$

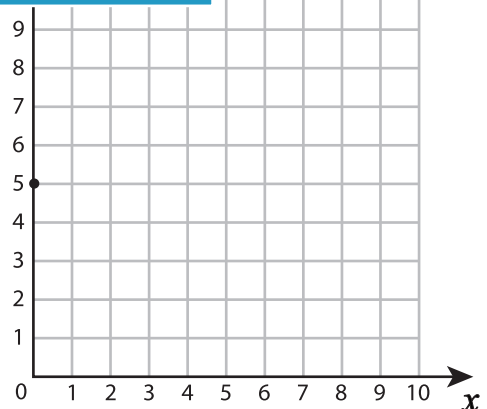
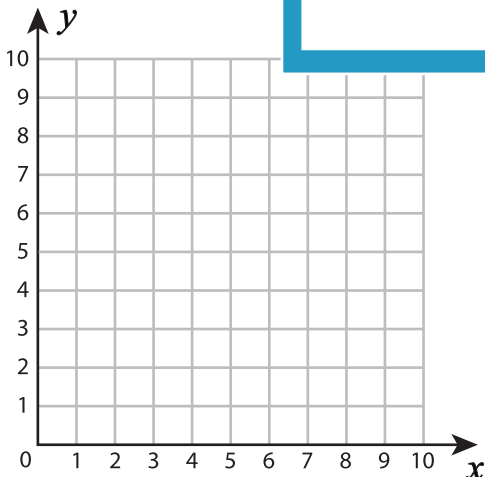
$(9, 3), (10, 2)$



Shape: _____

5) $(3, 7), (7, 5), (7, 3), (3, 3)$

$(3, 3), (10, 5), (7, 2), (3, 2)$



Shape: _____

Shape: _____

PREVIEW

Gain complete access to the largest collection of worksheets in all subjects!

Members, please log in to download this worksheet.

Not a member? Please sign up to gain complete access.

www.mathworksheets4kids.com