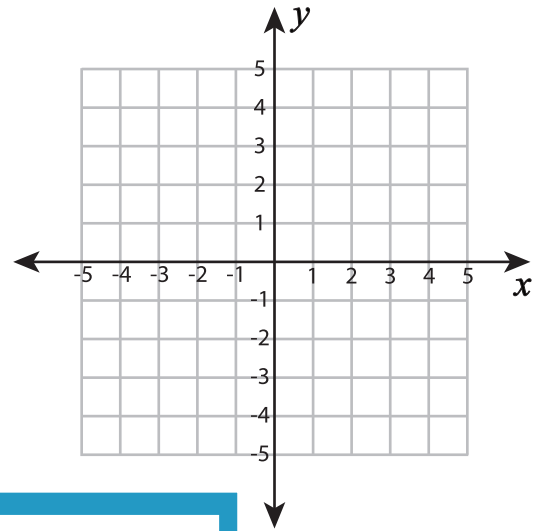
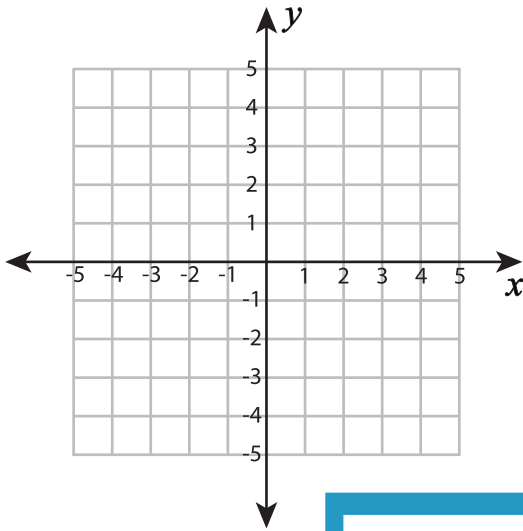


Plotting Points - Line segments

Plot each set of ordered pairs. Join the points and find the length of the line segment.

1) $(4, -1), (4, -5)$

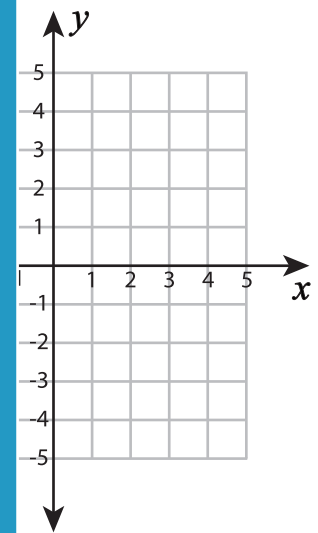
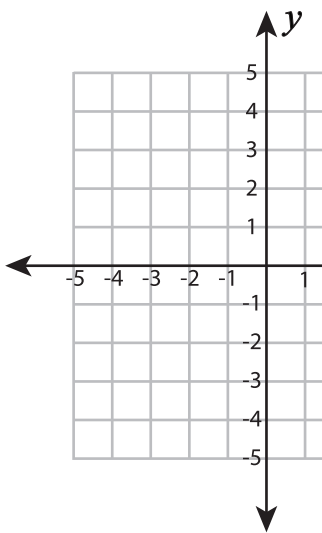
2) $(-5, -1), (4, -1)$



Length of the line segment = _____

Length of the line segment = _____

3) $(-1, 2), (5, 2)$



Length of the line segment = _____

Length of the line segment = _____

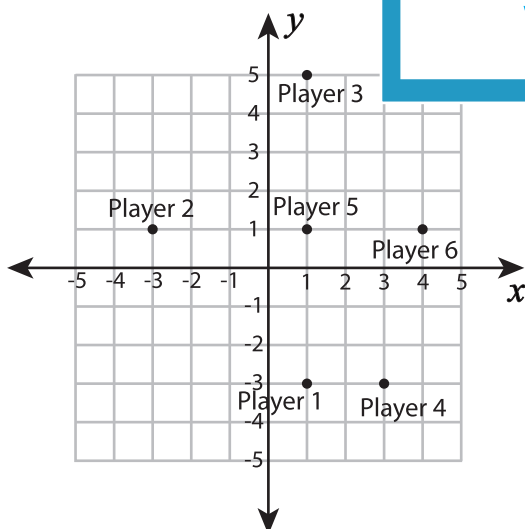
PREVIEW

Gain complete access to the largest collection of worksheets in all subjects!

Members, please log in to download this worksheet.

Not a member? Please sign up to gain complete access.

www.mathworksheets4kids.com



If each unit measured 2 yards, what would have been the distance traveled by the ball? _____

6) How many players are there at a distance of four units from player 5? _____

7) You are at $(3, 3)$. You are allowed to pass the ball either horizontally or vertically. To which player do you pass the ball? _____