

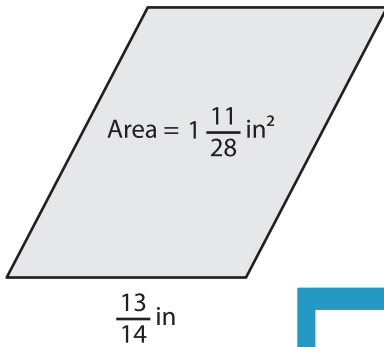
Name : _____

Parallelogram - Finding Base/Height

Sheet 2

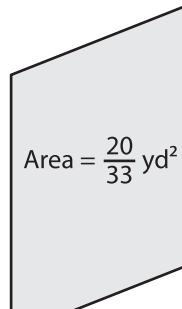
Find the base or height of each parallelogram.

1)

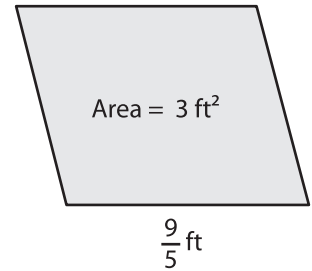


Height =

2)

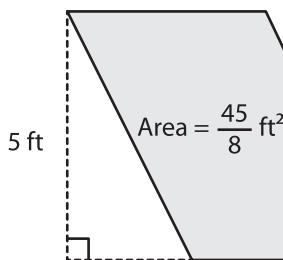


3)



Height =

4)



Base =

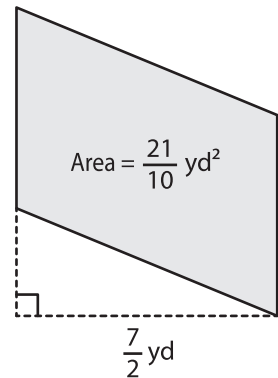
PREVIEW

Gain complete access to the largest collection of worksheets in all subjects!

Members, please log in to download this worksheet.

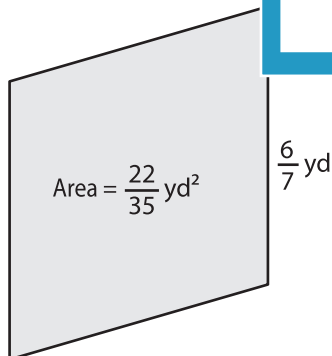
Not a member? Please sign up to gain complete access.

www.mathworksheets4kids.com

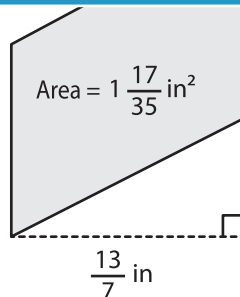


Base =

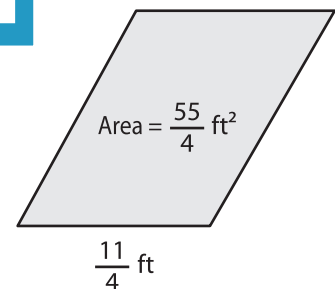
7)



Height =



Base =



Height =