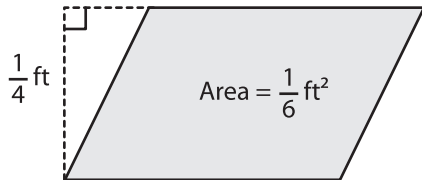


## Parallelogram - Finding Base/Height

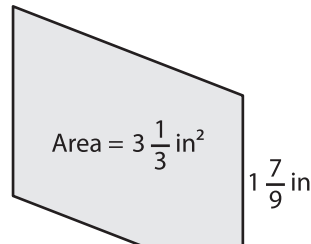
Find the base or height of each parallelogram.

1)

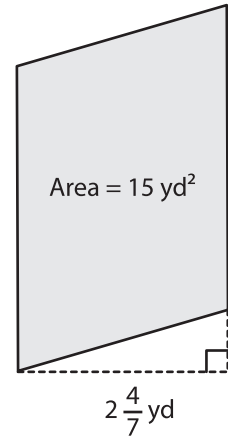


Base =

2)

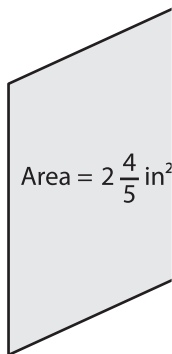


3)

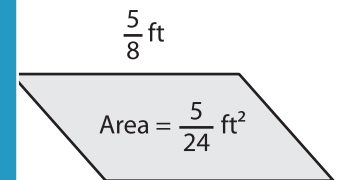


Base =

4)

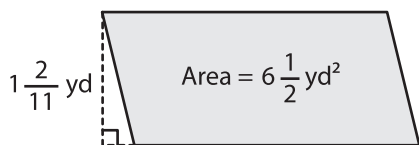


Height =

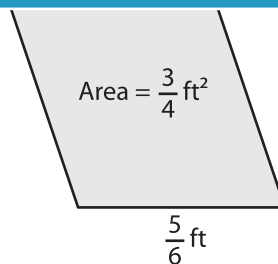


Height =

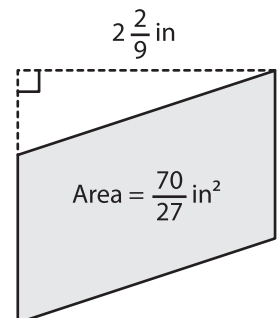
7)



Base =



Height =



Base =

# PREVIEW

Gain complete access to the largest collection of worksheets in all subjects!

Members, please log in to download this worksheet.

Not a member? Please sign up to gain complete access.

www.mathworksheets4kids.com