

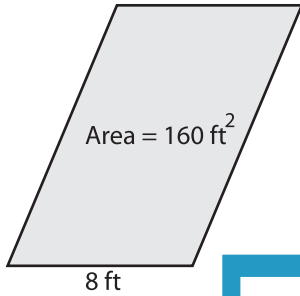
Name : \_\_\_\_\_

## Parallelogram - Finding Base/Height

L2S1

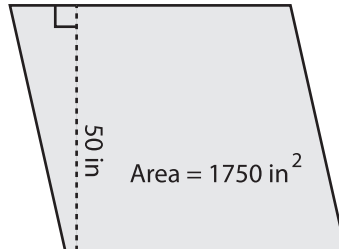
Find the base or height of each parallelogram.

1)

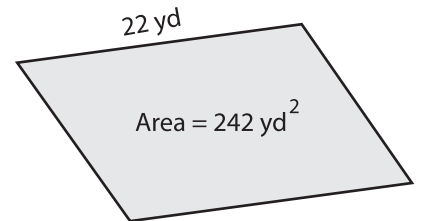


Height =

2)

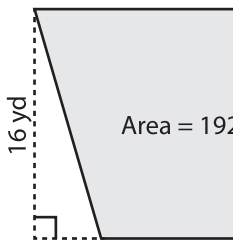


3)



Height =

4)



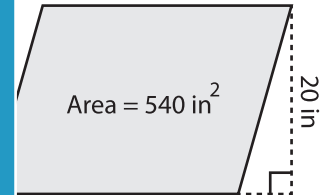
Base =

**PREVIEW**  
Gain complete access to the largest collection of worksheets in all subjects!

Members, please log in to download this worksheet.

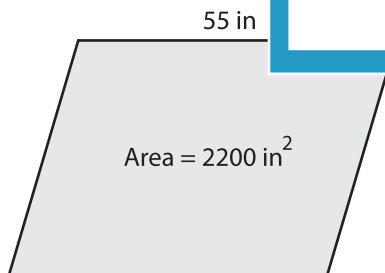
Not a member? Please sign up to gain complete access.

[www.mathworksheets4kids.com](http://www.mathworksheets4kids.com)

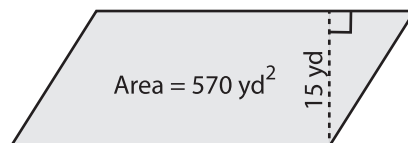


Base =

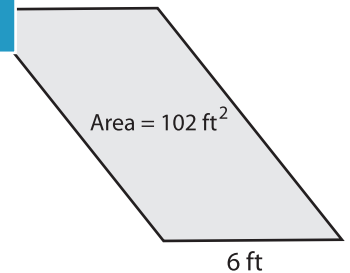
7)



Height =



Base =



Height =