

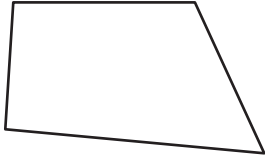
Name : _____

Parallelogram


Sheet 2

State whether each quadrilateral is a parallelogram.

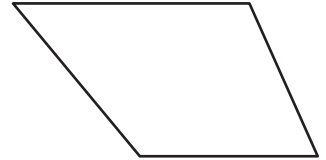
1)



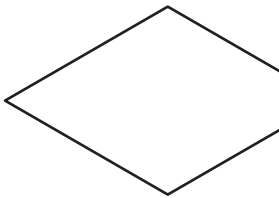
2)



3)



4)



PREVIEW

Gain complete access to the largest collection of worksheets in all subjects!

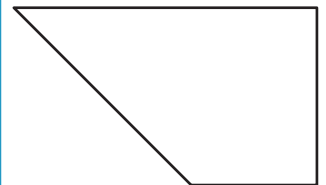
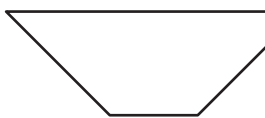
Members, please log in to download this worksheet.

Not a member? Please sign up to gain complete access.

www.mathworksheets4kids.com



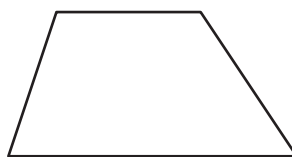
7)



10)



11)



12)

