

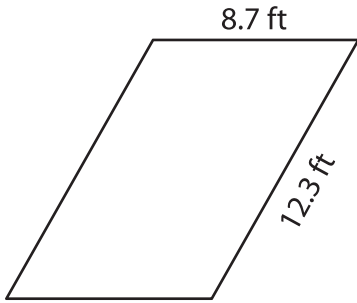
Name : _____

Perimeter of a Parallelogram

Sheet 1

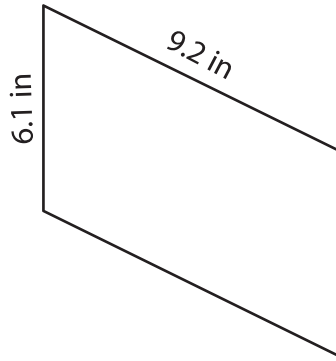
Find the perimeter of each parallelogram.

1)



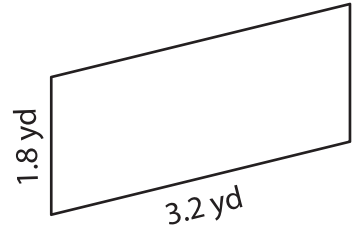
Perimeter = _____

2)



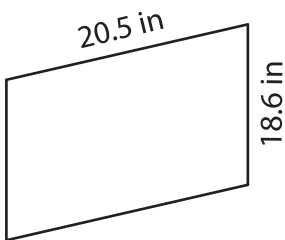
Perimeter = _____

3)



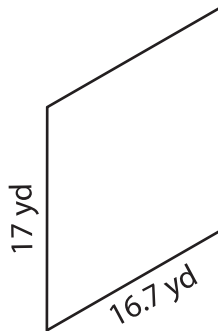
Perimeter = _____

4)



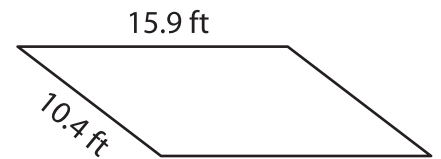
Perimeter = _____

5)



Perimeter = _____

6)



Perimeter = _____

7) If the lengths of the adjacent sides of a parallelogram are 13.8 feet and 24.6 feet, determine the perimeter of the parallelogram.

8) Find the perimeter of the parallelogram, if its adjacent sides measure 11.4 yards and 7.9 yards.
