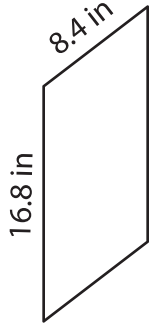


Name : \_\_\_\_\_

# Perimeter of a Parallelogram

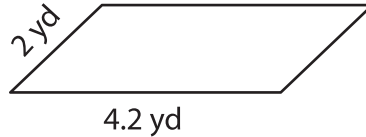
Find the perimeter of each parallelogram.

1)

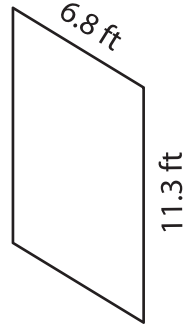


Perimeter = \_\_\_\_\_

2)

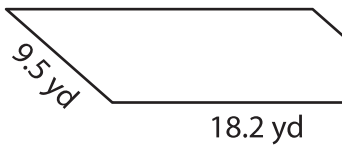


3)

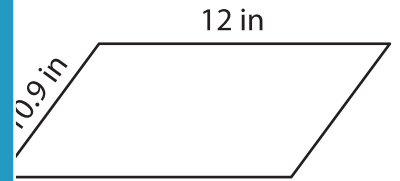


Perimeter = \_\_\_\_\_

4)



Perimeter = \_\_\_\_\_



Perimeter = \_\_\_\_\_

7) The adjacent sides of a p  
parallelogram.

Find the perimeter of the

\_\_\_\_\_

8) What is the perimeter of the parallelogram, if its adjacent sides measure 15.3 feet and 19 feet?

\_\_\_\_\_

**PREVIEW**

Gain complete access to the largest collection of worksheets in all subjects!

Members, please log in to download this worksheet.

Not a member? Please sign up to gain complete access.

[www.mathworksheets4kids.com](http://www.mathworksheets4kids.com)