

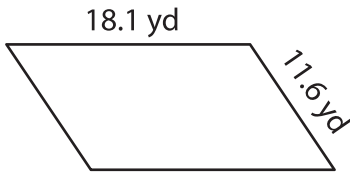
Name : \_\_\_\_\_

## Perimeter of a Parallelogram

Sheet 4

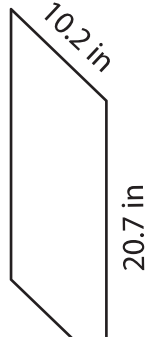
Find the perimeter of each parallelogram.

1)



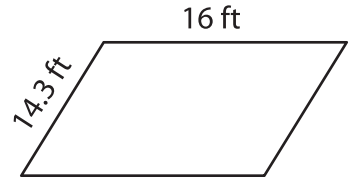
Perimeter = \_\_\_\_\_

2)

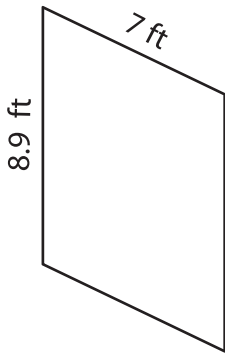


Perimeter = \_\_\_\_\_

3)



4)



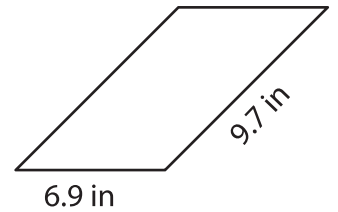
Perimeter = \_\_\_\_\_

**PREVIEW**  
Gain complete access to the largest collection of worksheets in all subjects!

Members, please log in to download this worksheet.

Not a member? Please sign up to gain complete access.

[www.mathworksheets4kids.com](http://www.mathworksheets4kids.com)



Perimeter = \_\_\_\_\_

7) The lengths of the adjacent sides are 12 inches and 15 inches. What is the perimeter of the parallelogram?

\_\_\_\_\_

8) Find the perimeter of the parallelogram, if the lengths of the adjacent sides are 17.8 yards and 23 yards.

\_\_\_\_\_