

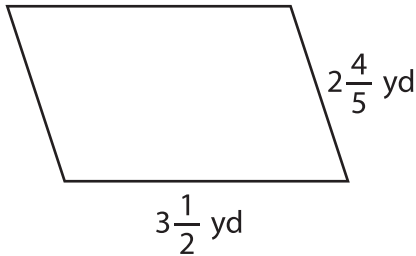
Name : _____

Perimeter of a Parallelogram

Sheet 3

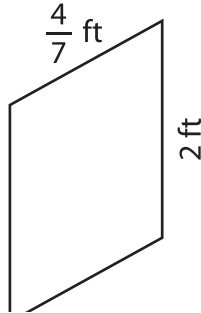
Find the perimeter of each parallelogram.

1)

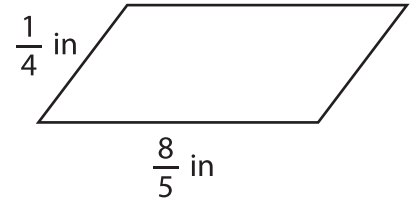


Perimeter =

2)

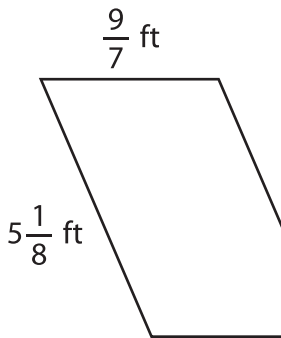


3)



Perimeter =

4)



Perimeter =

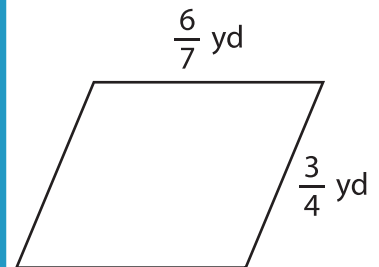
PREVIEW

Gain complete access to the largest collection of worksheets in all subjects!

Members, please log in to download this worksheet.

Not a member? Please sign up to gain complete access.

www.mathworksheets4kids.com



Perimeter =

7) What is the perimeter of

ch and $\frac{6}{7}$ inch?

8) The adjacent sides of a parallelogram measure $7\frac{1}{2}$ yards and $4\frac{1}{3}$ yards. Find the perimeter of the parallelogram.