

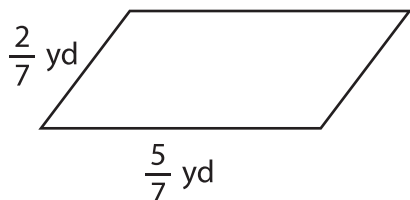
Name : _____

Perimeter of a Parallelogram

Sheet 5

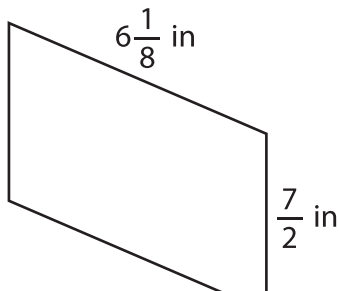
Find the perimeter of each parallelogram.

1)

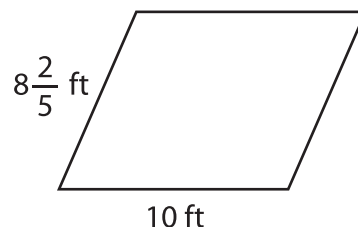


Perimeter =

2)

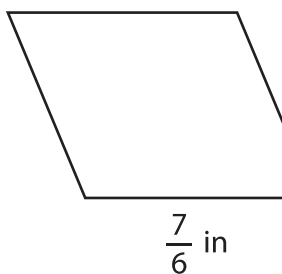


3)



Perimeter =

4)



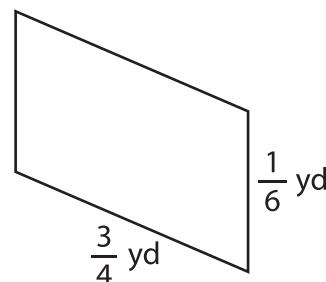
Perimeter =

PREVIEW
Gain complete access to the largest collection of worksheets in all subjects!

Members, please log in to download this worksheet.

Not a member? Please sign up to gain complete access.

www.mathworksheets4kids.com



Perimeter =

7) Find the perimeter of the

and $\frac{11}{6}$ feet.

8) If the lengths of the adjacent sides of a parallelogram are $4\frac{1}{2}$ yards and $5\frac{2}{3}$ yards, determine the perimeter of the parallelogram.