

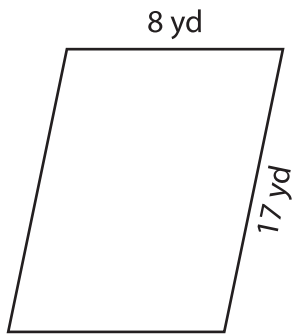
Name : _____

Perimeter of a Parallelogram

L1S4

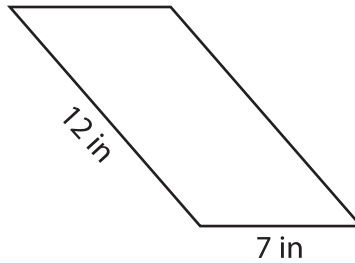
Find the perimeter of each parallelogram.

1)

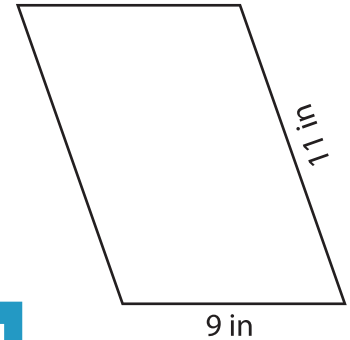


Perimeter = _____

2)

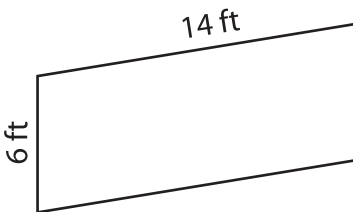


3)



Perimeter = _____

4)



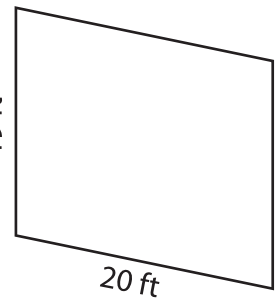
Perimeter = _____

PREVIEW
Gain complete access to the largest collection of worksheets in all subjects!

Members, please log in to download this worksheet.

Not a member? Please sign up to gain complete access.

www.mathworksheets4kids.com



Perimeter = _____

7) Determine the perimeter

of a parallelogram whose adjacent sides are 4 feet and 5 feet.

8) If the lengths of the adjacent sides of a parallelogram are 18 yards and 3 yards, find the perimeter of the parallelogram.