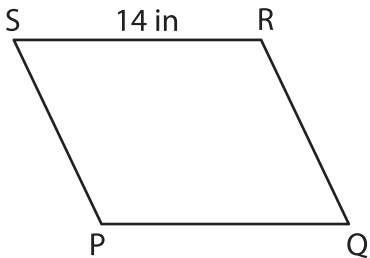


Name : _____

Perimeter of a Parallelogram

Find the missing side length of each parallelogram from the given perimeter.

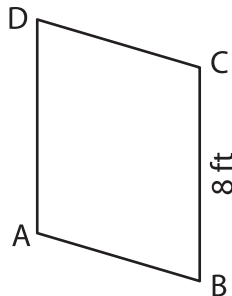
1)



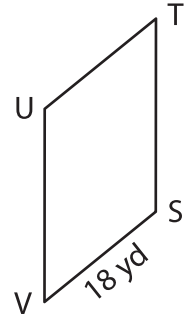
Perimeter = 52 in

QR = _____

2)



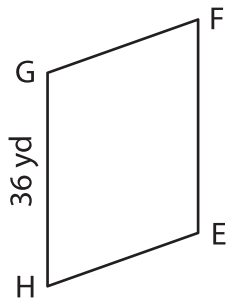
3)



Perimeter = 76 yd

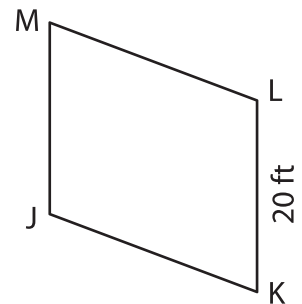
UV = _____

4)



Perimeter = 118 yd

FG = _____



Perimeter = 122 ft

LM = _____

PREVIEW

Gain complete access to the largest collection of worksheets in all subjects!

Members, please log in to download this worksheet.

Not a member? Please sign up to gain complete access.

www.mathworksheets4kids.com

7) A parallelogram has a perimeter of 100 feet. One of the adjacent sides is 28 feet. Find the length of the other adjacent side.

8) The length of one of the sides of a parallelogram is 16 inches. If the perimeter of the parallelogram is 102 inches, what is the length of the adjacent side?
