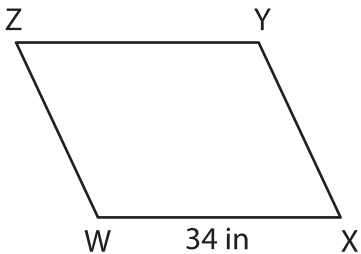


Name : \_\_\_\_\_

## Perimeter of a Parallelogram

Find the missing side length of each parallelogram from the given perimeter.

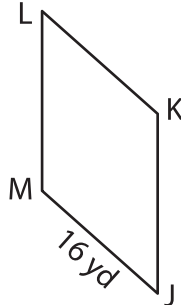
1)



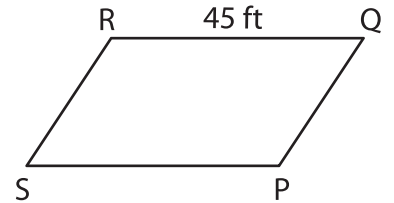
Perimeter = 106 in

WZ = \_\_\_\_\_

2)



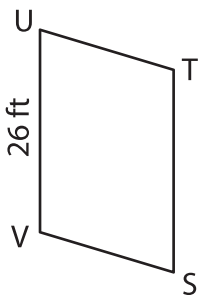
3)



Perimeter = 116 ft

RS = \_\_\_\_\_

4)



Perimeter = 92 ft

TU = \_\_\_\_\_

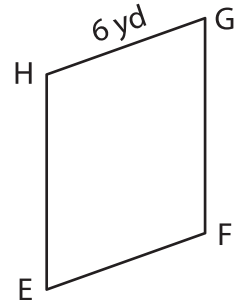
# PREVIEW

Gain complete access to the largest collection of worksheets in all subjects!

Members, please log in to download this worksheet.

Not a member? Please sign up to gain complete access.

[www.mathworksheets4kids.com](http://www.mathworksheets4kids.com)



Perimeter = 30 yd

FG = \_\_\_\_\_

7) The length of one of the sides is 12 inches. Find the length of the adjacent side, if the perimeter is 64 inches.

\_\_\_\_\_

8) The perimeter of a parallelogram is 136 feet. If one of its sides measures 31 feet, determine the length of the adjacent side.

\_\_\_\_\_