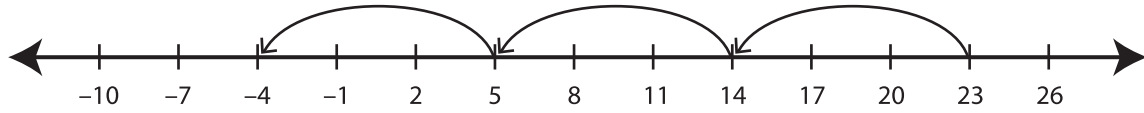


Recognizing Pattern

MS3

Describe the pattern followed by the hops in each number line.

1)



Start at 23. Subtract 9 each time.

2)



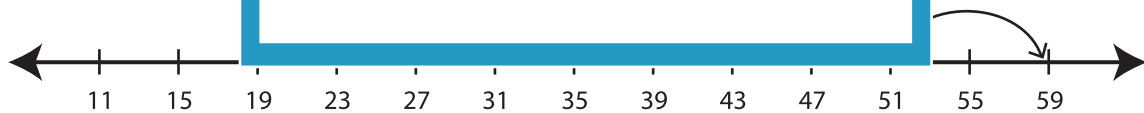
3)



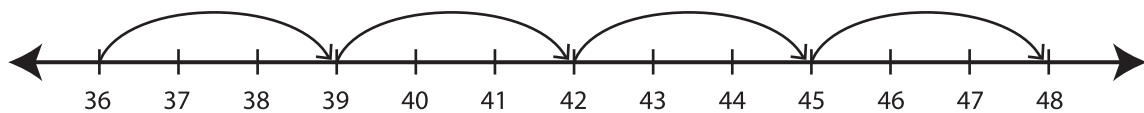
4)



5)



6)



PREVIEW

Gain complete access to the largest
collection of worksheets in all subjects!

Members, please
log in to
download this
worksheet.

Not a member?
Please sign up to
gain complete
access.

www.mathworksheets4kids.com