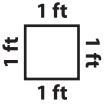


Name : \_\_\_\_\_


# Perimeter

Sheet 1




Find the perimeter of each shape.

1)



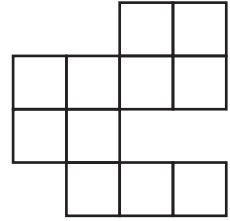
Perimeter = \_\_\_\_\_ ft

2)




Perimeter = \_\_\_\_\_ ft

3)




Perimeter = \_\_\_\_\_ ft

4)




Perimeter = \_\_\_\_\_ ft

5)




Perimeter = \_\_\_\_\_ ft

6)



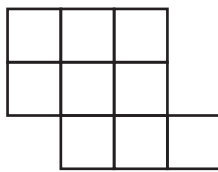
Perimeter = \_\_\_\_\_ ft

7)




Perimeter = \_\_\_\_\_ ft

8)




Perimeter = \_\_\_\_\_ ft

9)




Perimeter = \_\_\_\_\_ ft

10)




Perimeter = \_\_\_\_\_ ft

11)



Perimeter = \_\_\_\_\_ ft

12)



Perimeter = \_\_\_\_\_ ft