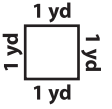


Name : _____

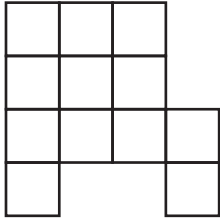
Perimeter

Sheet 3



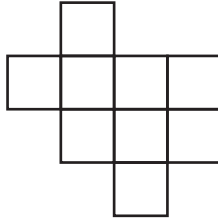
Find the perimeter of each shape.

1)



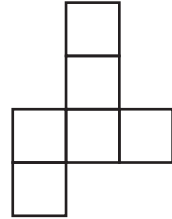
Perimeter = _____ yd

2)




Perimeter = _____ yd

3)



Perimeter = _____ yd

4)



Perimeter = _____ yd


PREVIEW

Gain complete access to the largest collection of worksheets in all subjects!

Members, please log in to download this worksheet.


Not a member? Please sign up to gain complete access.

www.mathworksheets4kids.com

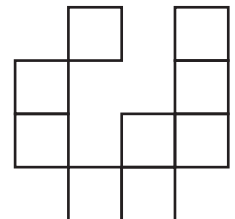


Perimeter = _____ yd

7)




Perimeter = _____ yd



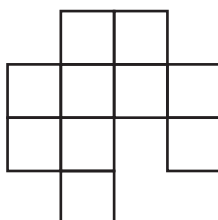
Perimeter = _____ yd

10)




Perimeter = _____ yd

11)



Perimeter = _____ yd

12)



Perimeter = _____ yd