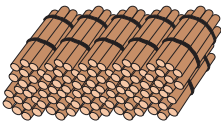


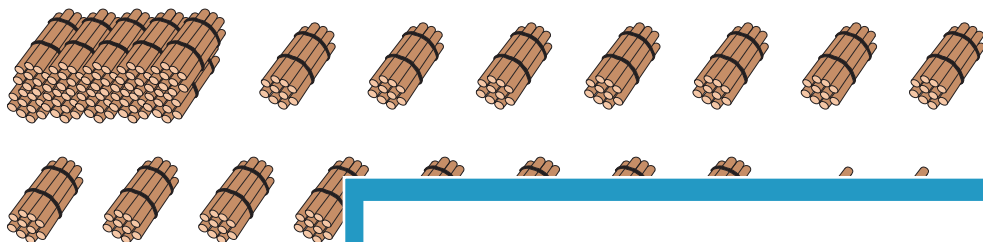


Bundles of Tens and Ones

Count the number of sticks using the information given below. Write how many in each set.

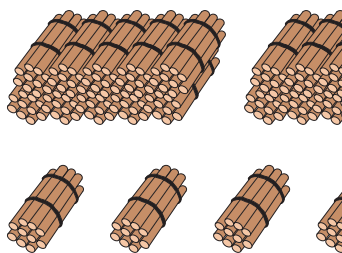
Bundle of Hundred	Bundle of Ten	One
		

1)




_____ hundreds
 _____ tens
 _____ ones

2)




_____ hundreds
 _____ tens
 _____ ones

3)



_____ hundreds
 _____ tens
 _____ ones

4)



_____ hundreds
 _____ tens
 _____ ones

PREVIEW

Gain complete access to the largest collection of worksheets in all subjects!

Members, please log in to download this worksheet.

Not a member? Please sign up to gain complete access.

www.mathworksheets4kids.com

Total number of sticks = _____

Total number of sticks = _____