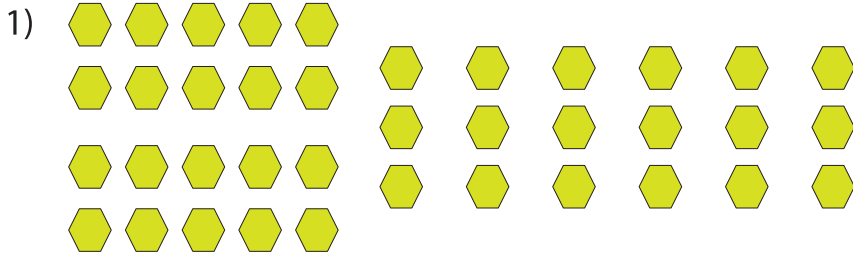


Bundles of Tens and Ones

The shapes are in groups of tens and ones. Count and write how many in all.




Tens	Ones

Total number of shapes = _____




Tens	Ones

Total number of shapes = _____



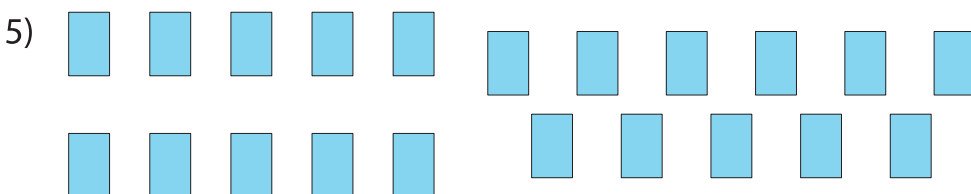
Tens	Ones

Total number of shapes = _____



Tens	Ones

Total number of shapes = _____



Tens	Ones

Total number of shapes = _____

PREVIEW

Gain complete access to the largest collection of worksheets in all subjects!

Members, please log in to download this worksheet.

Not a member? Please sign up to gain complete access.

www.mathworksheets4kids.com