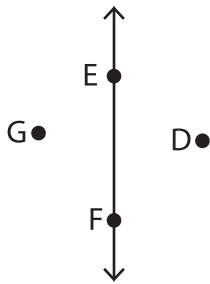


Collinear and non-collinear points

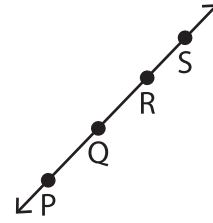
A) Write whether the given points are collinear or not collinear.

1)



Points D, E, F and G _____

2)

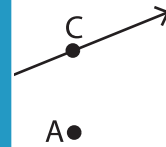


Points P, Q, R and S _____

3)



Points U, V and W _____



PREVIEW

Gain complete access to the largest collection of worksheets in all subjects!

Members, please log in to download this worksheet.

Not a member? Please sign up to gain complete access.

www.mathworksheets4kids.com

B) Write true or false.

a) Points C, D and E are not collinear. _____

b) Point C is not collinear to \overleftrightarrow{GF} and collinear to \overleftrightarrow{DE} . _____

c) Points A, C and F are collinear. _____

d) Point G is collinear with \overleftrightarrow{FH} and \overleftrightarrow{AE} . _____

e) Points A and B are not collinear. _____