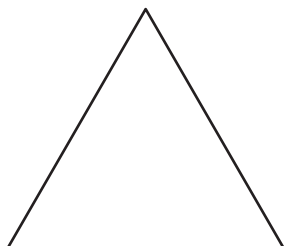


Exterior Angle

Find the exterior angle for each regular polygon. Round the answer to nearest whole number.

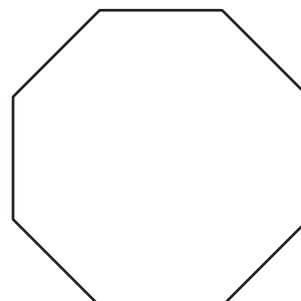
1)



Number of sides = _____

Each exterior angle = _____

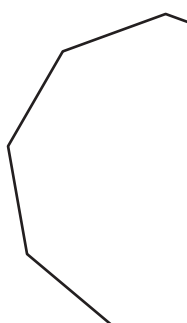
2)



Number of sides = _____

Each exterior angle = _____

3)



Number of sides = _____

Each exterior angle = _____



Number of sides = _____

Each exterior angle = _____

5) regular 20-gon

Number of sides = _____

Each exterior angle = _____

regular 15-gon

Number of sides = _____

Each exterior angle = _____

7) regular 13-gon

Number of sides = _____

Each exterior angle = _____

8) regular 19-gon

Number of sides = _____

Each exterior angle = _____

PREVIEW

Gain complete access to the largest collection of worksheets in all subjects!

Members, please log in to download this worksheet.

Not a member? Please sign up to gain complete access.

www.mathworksheets4kids.com