


Name : \_\_\_\_\_

## Interior Angle

ES5

Find the interior angle of each regular polygon. Round your answer to the nearest tenth.

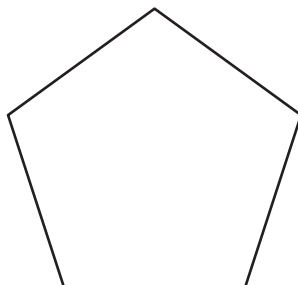
1)



Sum of the interior angles = \_\_\_\_\_

Each interior angle = \_\_\_\_\_

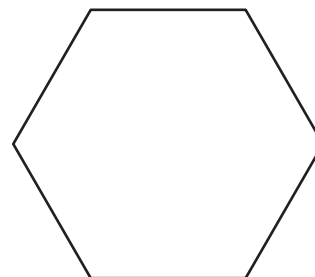
2)



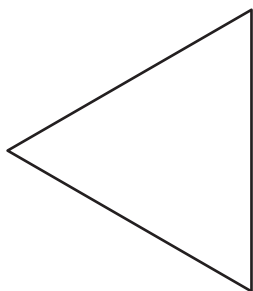
Sum of the interior angles = \_\_\_\_\_

Each interior angle = \_\_\_\_\_

3)



4)



Sum of the interior angles = \_\_\_\_\_

Each interior angle = \_\_\_\_\_

**PREVIEW**  
Gain complete access to the largest  
collection of worksheets in all subjects!

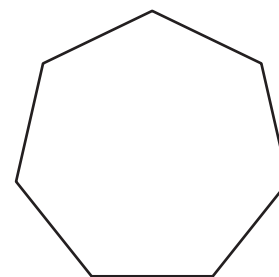
Members, please  
log in to  
download this  
worksheet.

Not a member?  
Please sign up to  
gain complete  
access.

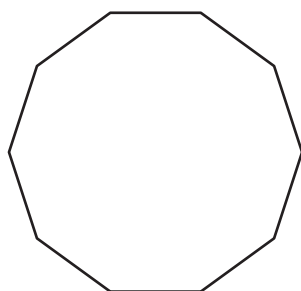
[www.mathworksheets4kids.com](http://www.mathworksheets4kids.com)

Sum of the interior angles = \_\_\_\_\_

Each interior angle = \_\_\_\_\_

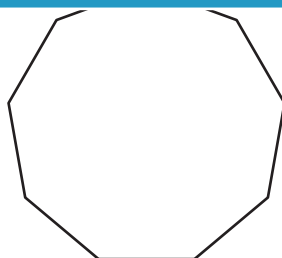


7)



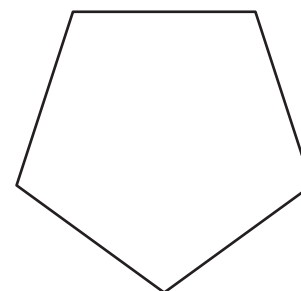
Sum of the interior angles = \_\_\_\_\_

Each interior angle = \_\_\_\_\_



Sum of the interior angles = \_\_\_\_\_

Each interior angle = \_\_\_\_\_



Sum of the interior angles = \_\_\_\_\_

Each interior angle = \_\_\_\_\_