

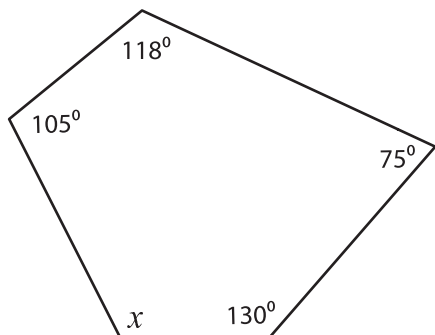
Name : _____

Interior Angle

Sheet 1

Find the value of x .

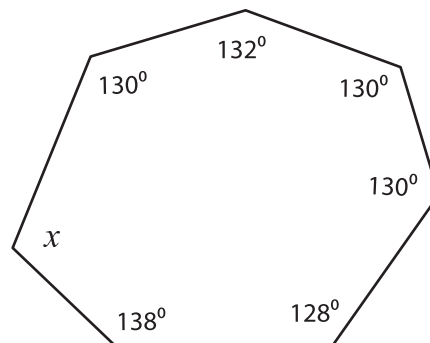
1)



Sum of the interior angles = _____

$x =$ _____

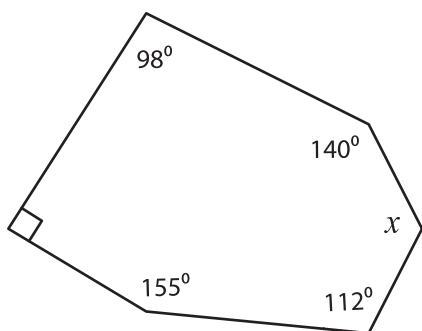
2)



Sum of the interior angles = _____

$x =$ _____

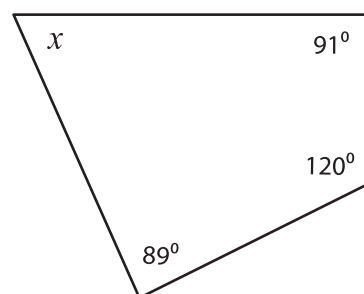
3)



Sum of the interior angles = _____

$x =$ _____

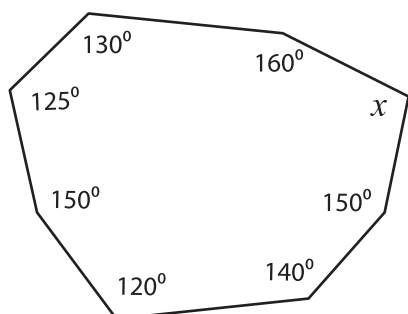
4)



Sum of the interior angles = _____

$x =$ _____

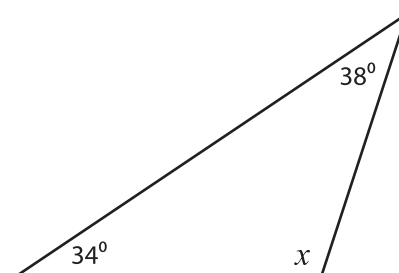
5)



Sum of the interior angles = _____

$x =$ _____

6)



Sum of the interior angles = _____

$x =$ _____