

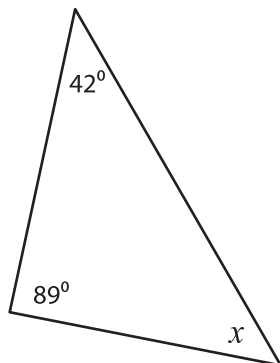
Name : _____

Interior Angle

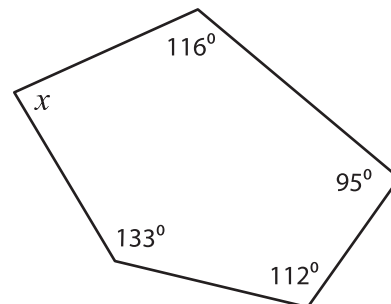
Sheet 2

Find the value of x .

1)



2)



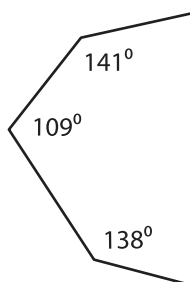
Sum of the interior

interior angles = _____

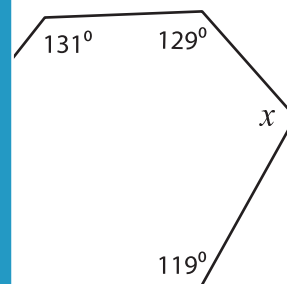
PREVIEW

$x =$ _____

3)



Gain complete access to the largest collection of worksheets in all subjects!



Members, please log in to download this worksheet.

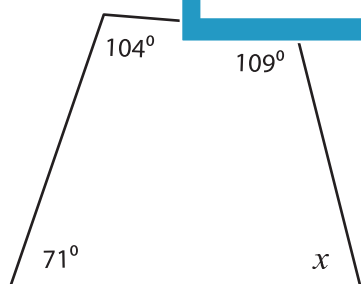
Not a member? Please sign up to gain complete access.

Sum of the interior

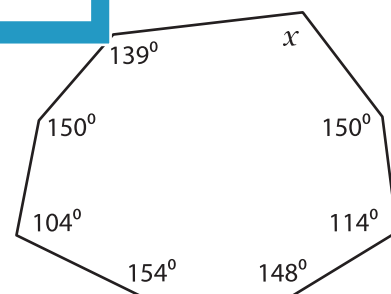
interior angles = _____

$x =$ _____

5)



www.mathworksheets4kids.com



Sum of the interior angles = _____

Sum of the interior angles = _____

$x =$ _____

$x =$ _____